

STANDARD 8 – CODE 001 – 2020

SOCIAL STUDIES AND RELIGIOUS EDUCATION

Time: 2 hour 15 minutes

READ THESE INSTRUCTIONS CAREFULLY

1. You have been given this question booklet and separate answer sheet. The question booklet contains 90 questions.
2. Do any necessary rough work on this booklet.
3. When you have chosen your answer, mark it on the **answer sheet**, not in this question booklet.

HOW TO USE THE ANSWER SHEET

4. Use only an ordinary pencil
5. Make sure you have written on the answer sheet:
Your Index Number
Your Name
Name of Your School
6. By drawing a **dark line** inside the correct numbered boxes mark your full Index Number (i.e. School Code Number and the three-figure Candidate's Number) in the grid near the top of the answer sheet.
7. Do not make any marks outside the boxes
8. Keep the sheet as clean as possible and not fold it.
9. For each of the questions 1 – 90 four answers are given. The answers are lettered A, B, C and D. In each case only **one** of the four answers is correct. Choose the correct answer.
10. On the answer sheet the correct answer is to be shown by drawing a **dark line** inside the box in which the letter you have chosen is written.

Example

In the Question Booklet:

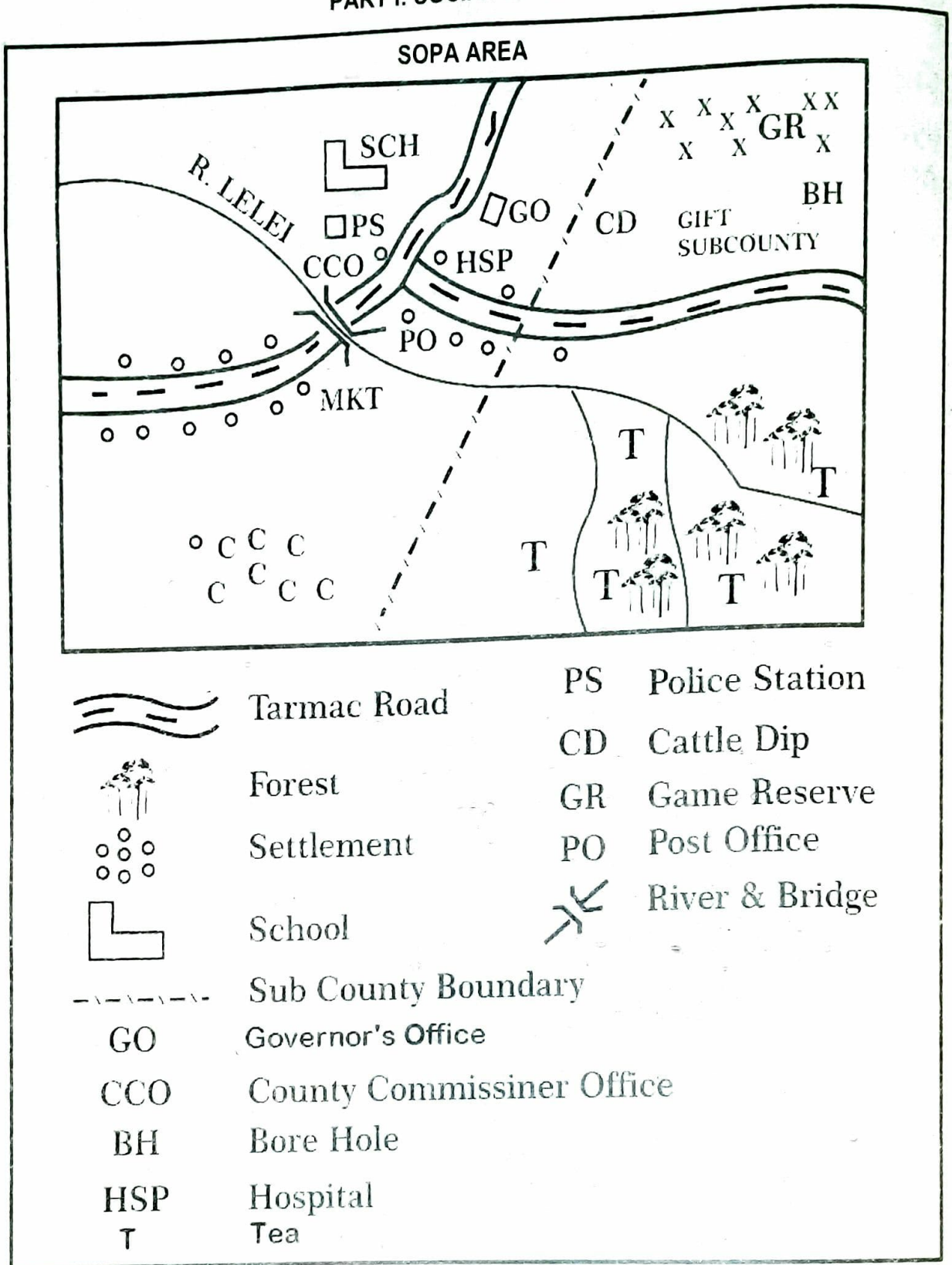
31. Which one of the following groups of people belong to a nuclear family?
- A. Mother, Son, Grandfather
 - B. Father, Son, Uncle
 - C. Father, Daughter, Son
 - D. Grandmother, Father, Daughter
- The correct answer is C

On the Answer Sheet:

11 [A] [B] [C] [D] **11** [A] [B] [C] [D] **21** [A] [B] [C] [D] **31** [A] [B] [C] [D] **41** [A] [B] [C] [D]
In the set of boxes numbered 31, the box with letter D printed in it is marked.

11. Your **dark line must** be within the box.
12. For each question **only one** box is to be marked in each set of four boxes.

PART I: SOCIAL STUDIES



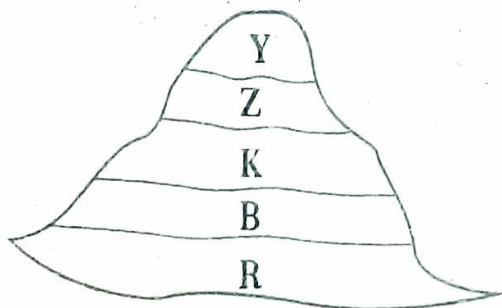
Study the map of SOPA area provided and answers questions 1 to 7.

1. Sopa area slopes towards
 - A. South East
 - B. North West
 - C. East
 - D. South

2. The main activity carried out in Sopa area is?
 - A. Transport
 - B. Fishing
 - C. Mining
 - D. Farming

3. The settlement pattern in the area is influenced by:
 - A. Transport
 - B. Drainage
 - C. Economic activities
 - D. Religious activities
4. The climate to the North East of Sopa Area is:
 - A. Cool and wet
 - B. Hot and dry
 - C. Hot and wet
 - D. Cool and dry
5. What is the direction of the Bore hole from the market?
 - A. South East
 - B. South west
 - C. North West
 - D. North East
6. Sopa area is administered by:
 - A. County commissioner
 - B. District commissioner
 - C. Governor
 - D. Members of County Assembly
7. Traders who wish to start a business in Sopa area should obtain trading license from:
 - A. Chief Office
 - B. County office
 - C. County commissioner's office
 - D. Police station

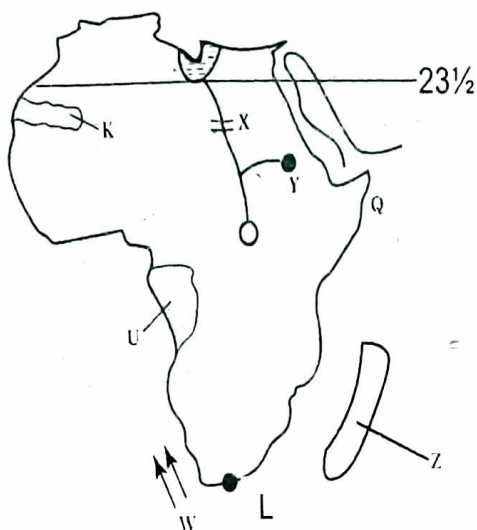
Use the diagram below to answer the questions that follow.



8. The part marked Z is
 - A. heath and moorland
 - B. rainforest
 - C. Savannah
 - D. snow and bare rock

9. The diagram above represents
 - A. rainforest
 - B. alpine forest
 - C. lowland forest
 - D. artificial forest
10. The main factor influencing the above vegetation is
 - A. mountain
 - B. rain
 - C. altitude
 - D. nearness to relief
11. The main economic activity in the section marked B is
 - A. pastoralism
 - B. lumbering
 - C. tourism
 - D. furniture making
12. The main reason that led to the migration of the river lake nilotes from South Sudan was
 - A. search for fishing ground
 - B. search for pasture and water
 - C. search for land for cultivation
 - D. overpopulation
13. The officers who carry out census are called
 - A. enumerators
 - B. encounters
 - C. returning officers
 - D. emeritus
14. The most economical method of poultry rearing is
 - A. battery system
 - B. free range system
 - C. deep litter system
 - D. fold system

Use the diagram below to answer the questions that follow.



15. The Ocean currents marked W are known as:

- A. Guinea current
- B. Agulhas current
- C. Walvis Bay current
- D. Canny current

16. The main effect of the current marked W on the nearby land is:

- A. brings convectional rain
- B. brings high humidity
- C. causes fog and mist
- D. increases agriculture

17. Vegetation on the Eastern side of the Island marked Z is?

- A. Equatorial
- B. Savannah
- C. Humid subtropical
- D. High veld

18. The main factor influencing climate in the area marked Q is

- A. relief
- B. latitude
- C. nearness to a large water body
- D. shape of coastline

19. The feature marked Y was formed as a result of

- A. downwrapping
- B. erosion
- C. lava damming
- D. human activities

20. The most southerly point of Africa marked L is:

- A. Cape Agullas
- B. Cape Verde
- C. Cape Ras Hafun
- D. Cape Lopez

21. The main reason for establishment of the project marked X is:

- A. industrialization
- B. put more land under cultivation
- C. improve water transport
- D. production of HEP

22. The policy of administration used in the country marked K was

- A. indirect rule
- B. paternalism
- C. assimilation
- D. association

23. The physical feature marked U on the area covered by the map is

- A. Fouta Djallon
- B. Adamawa Highland
- C. Ahaggar
- D. Tibesti

24. Which of the following countries is not crossed by the latitude marked $23\frac{1}{2}^{\circ}$ N?

- A. Western Sahara
- B. Mali
- C. Algeria
- D. Sudan

25. Which of the following factors does not influence population distribution in Kenya?

- A. Climate
- B. Soil
- C. Drainage
- D. Latitude

26. The type of soil suitable for fish farming is:

- A. Black cotton
- B. Red volcanic
- C. Sand
- D. Alluvial

Use the diagram below to answer the questions that follow.



27. The above diagram represents
- orographic rainfall
 - convective rainfall
 - frontal rainfall
 - cyclonic rainfall
28. Which of the following areas experience the above conditions?
- Nyeri
 - Lamu
 - Kisumu
 - Malindi
29. The nature of the winds marked X is
- warm and moist
 - cool and moist
 - cool and wet
 - cold and dry
30. The main economic activity in the side marked Y is:
- apiculture
 - mixed farming
 - tourism
 - beef farming
31. A group of people born and initiated around the same time forms
- an age group
 - a clan
 - a family
 - an age set
32. Which of the following is not a dairy breed of animal?
- Friesian
 - Jersey
 - Guernsey
 - Red Poll
33. The largest pastoral community in Africa are:
- Maasai
 - Fulani
 - Tswana
 - Khoikhoi
34. Maize in Kenya was introduced by the
- British
 - Arabs
 - Missionaries
 - Portuguese
35. (i) Used in glass making
(ii) Used in fixing dyes
(iii) Used for softening water
(iv) Used in oil refineries
The mineral described above is?
- Soda Ash
 - Diatomite
 - Fluorspar
 - Limestone
36. Which of the following is a tertiary industry?
- Furniture making
 - Fruit canning
 - Vehicle assembly
 - Banking
37. Which road connects East Africa to West Africa?
- Great North road
 - Trans-Saharan highway
 - Trans-Saharan Highway
 - Cotonou Gao Oudja
38. Which one of the following is not a copper mining area in Zambia?
- Mfulira
 - Bwana mkubwa
 - Chilufya
 - Lubumbash
39. Which one of the following is a print media?
- Electronic mail
 - Fax
 - Billboard
 - Short message service

40. Who among the following leaders resisted the French occupation of his/her area?
 A. Samoure Toure
 B. Koitalel Arap Samoei
 C. Mekatilili wa Menza
 D. Kabaka Mwanga
41. The arm of the government that interprets the law is
 A. Legislative
 B. Executive
 C. Judiciary
 D. Cabinet
42. Who among the following is in charge of elections in a polling station?
 A. Returning officer
 B. Presiding officer
 C. Polling station clerk
 D. Chairperson of IEBC
43. Which one of the following is not an effect of rotation of the earth?
 A. Causes deflection of wind and ocean currents
 B. Cause day and night
 C. Causes differences in time along different longitudes
 D. Causes different seasons
44. When is it summer solstice?
 A. June 21st
 B. March 21st
 C. September 23rd
 D. December 22nd
45. The largest lake in the desert in Africa is
 A. Lake Chad
 B. Lake Turkana
 C. Lake Siwa
 D. Lake Birket
46. The main economic activity in the smallest relief region in Kenya is?
 A. Farming
 B. Fishing
 C. Tourism
 D. Pastoralism
47. The sixth Chapter of the new constitution is?
 A. Land and environment
 B. Leadership and integrity
 C. Bill of rights
 D. The republic
48. The statements issued by the speaker to declare seats both elective and nominative are called:
 A. proroque
 B. summons
 C. mace
 D. writs
49. The head of the legal system in Kenya is
 A. President
 B. Chief justice
 C. Attorney general
 D. Speaker
50. The atmospheric pressure is measured in units known as:
 A. barometer
 B. campbell recorder
 C. knots
 D. millibars
51. Lines on a map joining places with the same temperature are known as
 A. isotherms
 B. isohyets
 C. isoneps
 D. isohels
52. The first African to join the Legco was:
 A. B.A Changa
 B. Eliud Mathu
 C. Jomo Kenyatta
 D. Daniel Moi
53. The traditional parliament of Swaziland is called
 A. liqoqo
 B. lukiko
 C. senate
 D. libandala

54. The first chairperson of Africa Union was
 A. Haile Selassie
 B. Thabo Mbeki
 C. Kwame Nkrumah
 D. Gamal Abdel Nasser
55. Which one of the following is not a block mountain?
 A. Mt. Ruwenzori
 B. Mt. Pare
 C. Mt. Meru
 D. Mt. Usamabara
56. The main problem facing trading blocks in Africa is
 A. lack of variety of goods
 B. poor transport and communication
 C. lack of common currency
 D. quota system
57. Specialized skills in informal education were taught through
 A. observation and imitation
 B. apprenticeship
 C. proverbs and riddles
 D. formal assessment
58. Which of the following countries were recognized by USA as a home of slaves?
 A. Liberia
 B. Ethiopia
 C. Egypt
 D. South Africa
59. The main problem facing communication systems in Africa is?
 A. Vandalism
 B. Illiteracy
 C. Network problem
 D. Different languages
60. Who among the following represents the country in the National Assembly?
 A. Governor
 B. Member of county assembly
 C. Member of county council
 D. Member of county assembly

PART II: RELIGIOUS EDUCATION CHRISTIAN RELIGIOUS EDUCATION

61. According to the genesis stories of creation
 A. birds and sea creatures were created after man
 B. heavenly bodies were created on the fifth day
 C. man was created on the fifth day
 D. plants were created on the third day
62. Which statement corresponds to the promise given by God to Abraham?
 A. He will have a son
 B. He will build a temple in Jerusalem
 C. His descendants will not die
 D. He will be a king
63. The story of Joseph in Potiphar's house teaches Christians to
 A. fight for their rights
 B. be kind
 C. forgive their enemies
 D. overcome temptations
64. During the call of Moses, God's presence was manifested by
 A. a cloud
 B. a burning bush
 C. a flaming torch
 D. a sword of fire
65. The freeing of the Israelites from Egypt is recorded in the book of
 A. Numbers
 B. Exodus
 C. Genesis
 D. Leviticus
66. Which one of the Ten Commandments was given to Moses on Mount Sinai?
 A. Forgive those who trespass against us
 B. Do not desire your neighbour's property
 C. Forgive those who forgive you
 D. Judge others wisely

67. The temple of Jerusalem was built by:

- A. David
- B. Saul
- C. Solomon
- D. Jeroboam

68. _____ healed Naaman of leprosy

- A. Elijah
- B. Gehazi
- C. Moses
- D. Elisha

69. In Luke 2:10, the Angel said "Do not be afraid, I am here with good news for you". The good news was the:

- A. death of Jesus
- B. dedication of Jesus
- C. resurrection of Jesus
- D. birth of Jesus

70. At the age of the twelve years, Jesus was taken to the temple for:

- A. dedication and purification
- B. the Passover feast
- C. baptism
- D. circumcision

71. Which one of the following does not explain what external life means?

- A. It begins after birth
- B. It begins on earth and continues in heaven
- C. It starts when one believes in Jesus
- D. It is life without an end

72. According to Jesus, the Kingdom of God belongs to those who are like children because they:

- A. are pure and innocent
- B. are poor and weak
- C. are lame and innocent
- D. pray to God always

73. Christian fasting period is known as

- A. Advent
- B. Lent
- C. Christmas
- D. Easter

74. _____ replaced Judas after his death.

- A. Paul
- B. Mathew
- C. Mathias
- D. Peter

75. By fixing Malchus' ear which was cut by Peter, Jesus demonstrated that he was:

- A. a peaceful Messiah
- B. able to forgive sins
- C. in charge of nature
- D. a universal savior

76. Who among the following died because of cheating the Holy Spirit?

- A. Judas
- B. Peter
- C. Saphira
- D. Stephen

77. Who among the following was not among the seven deacons?

- A. Philip
- B. Nicolas
- C. Prochorus
- D. Saul

78. The only historic book New Testaments is:

- A. Genesis
- B. Nicholas
- C. Malachi
- D. Acts of Apostles

79. The best way in which children demonstrate love and respect is by:

- A. doing whatever they want
- B. asking for anything from their parents
- C. kneeling down when greeting their parent
- D. following their advice to the letter

80. Stephen the deacon was accused of:

- A. preaching against the Roman government
- B. blasphemy
- C. converting many Jews into Christianity
- D. healing on a Sabbath

81. Sex before marriage is known as:

- A. adultery
- B. incest
- C. fornication
- D. masturbation

82. Which one of the following practices was common among African traditional communities?
- A. Worshipping on Sabbath
 - B. Offering animal sacrifices to God
 - C. Circumcision of girls before marriage
 - D. Pouring libations to appease the ancestors
83. According to both African creation stories and in Genesis:
- A. God created man and other things after
 - B. we must respect and care for God's creation.
 - C. people came from heaven
 - D. men helped God during creation
84. Which one of the following is a community based community thing?
- A. Being a senator
 - B. Joining a local health centre
 - C. Participating in an effort raise money for local health centre
 - D. Buying a big car
85. One of the following has a characteristics of a public property except one. It is
- A. property that can be owned by an individual
 - B. property that is only for selected few
 - C. property that is owned by tycoons
 - D. Property that is communally owned
86. Paul and Silas worshipped God by:
- A. praying and singing hymns
 - B. hands on the fellow prisoners
 - C. preaching to the Prison officer
 - D. praying and fasting
87. The early Christian missionaries built the first mission station at:
- A. Rabai
 - B. Malindi
 - C. Lamu
 - D. Mombasa
88. Jane does not take her report book home for the parents to sign. Which Christian value does she lack?
- A. Hard work
 - B. Obedience
 - C. Patience
 - D. Honesty
89. Joel's grandfather has been in hospital for six months now. As a christian, Joel should:
- A. cease praying for his grandfather
 - B. take him away from hospital to reduce the hospital bill
 - C. persist in praying for his grandfather
 - D. poor libation to appease the ancestral spirits
90. The early Christian missionaries came to Kenya to:
- A. introduce Western culture
 - B. spread the good news
 - C. promote African culture
 - D. stop slave trade

ISLAM RELIGIOUS EDUCATION

61. In which Surah does Allah (SWT) teach us that severe punishment will be given to those who deny the righteous to practice their faith?
- Surah al Alaq
 - Surah al-Qadar
 - Surah Al-Tin
 - Surah al -Fatiha
62. How many Rakaats does a Muslim pray in Salatut Tahajjud during the night of power?
- 4 Rakaats
 - 6 Rakaats
 - 2 Rakaats
 - 8 Rakaats
63. The hadith, 'keep away from two cursed actions the passing of urine or stool along the pathways or where people sit'. Teaches us about:
- Ilham
 - Twahara
 - Ibada
 - Saum
64. The prophet (saw) said, "Muslims are like a single building, each side holds the other". The Hadith teaches us the importance of:
- social gathering
 - unity among the Muslims
 - congregational prayer
 - building strong houses
65. During Hajj Muslims run or jog between Mt. Safa and Marwa. This act is referred to as:
- Miqat
 - Arafat
 - Sa'l
 - Taqseer
66. In Hajj **NUSUK** refers to:
- the act of running between Safa and Marwa
 - the rites of Hajj
 - the act of going round the Kaaba seven times
 - the act of stoning at the Jamarrat
67. From which Surah of the Holy Quran do we get this verse? "Wama adraka maa Laylatul Qadar"
- Suratul Zilzala
 - Suratul Maun
 - Suratul Tiyn
 - Suratul Qadar
68. Why it's **NOT** recommended for a Muslim to fast on Saturday alone?
- It is an Eid day for Muslims
 - Muslims should relax and eat nice meals on this day
 - It's a day honored mostly by the Jews
 - It's a day when Muslims are supposed to fight Jihad
69. Which of the following types of tawaaf is compulsory?
- Tawaful Ifadha
 - Tawaful Qudum
 - Tawaful Widaa
 - Tawaful Tamattu
70. Man should be thankful to Allah (SWT) as he was created in the best form and in good proportion. This teaching is obtained from Suratul:
- Al-Alaq
 - Al-Qadar
 - Al-Tiyn
 - Al-Nasr
71. A neighbor who been pouring dirty water in front of your house has been admitted to hospital. Which one of the following acts will be the **BEST** thing to do?
- Visit him at the hospital and pray for him
 - Pray for him to die as he is a bad person
 - Arrange for his house to be robbed by thieves
 - Be happy as he will not pour dirty water again

72. Bismi-lah, Allah Akbar, Allah-Huma-mahaadha mnika wa ilayka". These words are said when:
 A. one converts to Islam
 B. one is in a big problem
 C. one is near to die
 D. one wants to slaughter especially for a pilgrim in Hajj
73. The belief in Allah (SWT) can also be said as:
 A. Maashaalah
 B. Amantu –Billah
 C. Inna-Lilah
 D. Astaqhirullah
74. The belief in the day of Maashara is one of the articles of:
 A. Islam
 B. Sunnah
 C. Iman
 D. Ihsan
75. Allah does not punish immediately when we sin. This is because he is patient. This attribute is called:
 A. As-Sabur
 B. Al-Hasseeh
 C. Al-Baqii
 D. Al-Hakim
76. The following statements are correct **EXCEPT** one. Which one?
 A. Al-Khidhir means green
 B. The treaty of Huddaybiyah was to last for 10 years
 C. Ayyamul-Beidh are the 13th, 14th and 15th of every Muslim month
 D. Sittatu-Shawaal is the six days of the month of Shawaal
77. Which one of the following locations of Hajj reminds us of the Day of Judgement?
 A. Miqat
 B. Arafat
 C. Muzdalifa
 D. Mina
78. An important occasion in the month of Shawwal is called?
 A. Ashura
 B. Miraj
 C. Eidul Adha
 D. Eidul-Fitri
79. The festival which is wrongly matched with the date of occurrence is:
 A. Hijrah -10th Muharam
 B. Miraj -27th Rajab
 C. Miladun Nabii -12th Rabbil-Awal
 D. Eidul-Adha -10th DhUL-Hijah
80. In Islam its makruh to eat _____ before attending jum'ah prayers
 A. fish
 B. oranges
 C. onions
 D. cabbages
81. Which one of the following statements is **NOT** an effect of drug abuse?
 A. They make one bright in class
 B. Can cause death
 C. May damage body parts
 D. May lead to HIV and AIDS infection
82. The following terms are against Islamic practices **EXCEPT** one. Which one is it?
 A. Ghush
 B. Black marketing
 C. Bargaining
 D. Usury
83. When Bani-Bakr and the Quraysh attacked Banu-Khuzaaah, the prophet (SAW) gave them **THREE** conditions. Which one is **NOT**?
 A. Compensate by paying blood money
 B. End their treaty with Bani- Bakr
 C. Review their treaty with the Muslims
 D. Cancel their treaty with the Muslims

84. Why did the prophet (SWT) instruct his army to avoid bloodshed during the conquest of Makkah?
- A. He wanted a peaceful conquest
 - B. He was not prepared to fight
 - C. The Muslims were fewer than the Makkans
 - D. The Muslim army was weaker than the Quresh Army
85. Sijdatul Tilawa is performed when a person:
- A. is reading the Holy Quran
 - B. wants to thank Allah (SW) for success
 - C. is unable to stand during prayers
 - D. omits a pillar of salah
86. Allah (SWT) gave His angels duties to perform. The angel who is yet to perform his duty is?
- A. Mikael
 - B. Jibril
 - C. Israfil
 - D. Izrail
87. Which of the following virtues denied Nabii Musa from learning more from Al-Kidhr?
- A. Patience
 - B. Obedience
 - C. Truth
 - D. Righteousness
88. "Am prophet of Allah (SWT), I spoke to Allah behind a veil of fire. Who am I?"
- A. Nuh (AS)
 - B. Musa (AS)
 - C. Issa (AS)
 - D. Muhammad (S.A.W)
89. Three of the following are positive use of the tongue. Which one is **NOT**?
- A. Educating others
 - B. advocating for injustice
 - C. Reading the Holy Quran
 - D. Speaking the truth
90. Muslims from Kenya will put on Ihram at a place called?
- A. Yalamlam
 - B. Dhul- Hulaifa
 - C. Dhat Iraq
 - D. Juhfa