



Code 0012020

THE TIMER NATIONAL SERIES

MONITORING LEARNERS' PROGRESS

Grade 4 - 2020

INTEGRATED LEARNING AREAS

.SCIENCE AND TECHNOLOGY

.AGRICULTURE

.HOMESCIENCE

NAME.....

Learner's Number

Gender Boy

Girl

County name County code

Sub county name Sub county code

School name School code

The grid below is to be filled by the teacher after marking the learner's work.

	Level 1	Level 2	Level 3	Level 4
Science and Technology				
Agriculture				
Homescience				

SECTION A
SCIENCE AND TECHNOLOGY

1. _____ is caused by lack of rain.

Name two things we use during rain weather.

2. _____

3. _____


4. _____ water is safe for drinking.

Name two plants that give us fruits.



5. _____

6. _____

7. Colour this thorny plant



Draw two animals that give us eggs



Name two sources of heat

10. _____


11. _____

12. We use heat to

Match things that can start fire at home

13.  Gas

14.  Kerosene


15.  Matchstick

Name two ways you collect rain water in school


16. _____


17. _____


Fill in the gaps-
Sources of light

18.  C _ _ ndl _ _ _

19.  S _ _ n


20.  M _ _ _ n

21.  T _ _ _ rch

22.  El _ _ _ _ _ tricity

23.  L _ _ _ amp

Name and colour body parts

24.  _____

25.  _____

SECTION B:
AGRICULTURE

1. Sand soil has _____ texture. (rough, smooth)

2. Clay soil has _____ particles. (fine, medium)

Match with the size of the particles

3. Clay Big

4. Sand Small

5. There are _____ types of soil.

Fill gaps to complete types of soil

6. L___am

7. Cl___y

8. S_____nd

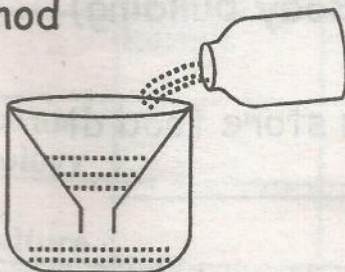
Name three sources of water

9. _____

10. _____

11. _____

12. Colour picture of filtering method



13. _____ animals stay in the forest.

14. We should not _____ wild animals (kill, plant)

Name fruits we get from these plants

15. Mango plant _____

16. Apple tree _____

17. Orange tree _____

18. Which animal has the largest neck in the forest?

Match the animal with the food it gives us

19. Bee Milk

20. Cow Egg

21. Duck Sausage

22. Pig Honey

23. Which animal guards our home? _____

Name two plants grown in the kitchen garden

24. _____

25. _____

SECTION C
HOMESCIENCE




Write the two good healthy habits

- Drinking boiled water
- Fighting
- Washing fruit

1. _____

2. _____

Draw and name three materials we use for cleaning our classroom.



Name 4 kitchen utensils

6. _____

7. _____

8. _____

9. _____

10. Most tablets are for _____ use.

(external, internal)

11. _____ are used by boys only.

12. A _____ is found outside a house (toilet, latrine)

13. External parasites are found _____ our body (in, on)

Fill in the gap to write a parasite name.

14. L _____ ce

15. J _____ ggers

16. B _____ dbugs



17. W _____ rm

Name two causes of bedwetting

18. _____

19. _____

Draw two foods found in your area



22. Name one table manners you observe when taking breakfast

23. Which group are these foods? Beans, Meat, Milk

(Protective, Body building)

24. Where do you store food at home? _____

25. _____ is when blood comes out through your nose.