

# SIGNAL EARLY YEAR'S ASSESSMENT

## MONITORING LEARNERS' PROGRESS Grade 4 - 2020 MATHEMATICS ACTIVITIES

001

Name.....

Learner's Number

Gender: Boy

Girl

County Name..... County Code

Sub- County Name..... Sub- County Code

School Name..... School Code

## TEACHER'S SCORING GUIDE

The grid below is to be filled by the teacher after marking the learner's work.

Strand	Numbers	Measurement	Geometry
Question Numbers	1 - 15	16 - 23	24 - 25
No. Of Questions Correct			
Performance Level			



Write the place value of the underlined digit in the numbers below.

1.  $4\underline{0}186$  \_\_\_\_\_

2.  $\underline{5}9973$  \_\_\_\_\_

Write in words or symbols.

3.  $694$  \_\_\_\_\_

4. Nine thousand four hundred.  
\_\_\_\_\_

Add

5. 
$$\begin{array}{r} 394 \\ + 205 \\ \hline \end{array}$$

6. 
$$\begin{array}{r} 486 \\ + 462 \\ \hline \end{array}$$

Subtract

7. 
$$\begin{array}{r} 666 \\ - 347 \\ \hline \end{array}$$

8. 
$$\begin{array}{r} 650 \\ - 415 \\ \hline \end{array}$$

Multiply

9.  $8 \times 6 =$

10. 
$$\begin{array}{r} 10 \\ \times 9 \\ \hline \end{array}$$

Divide

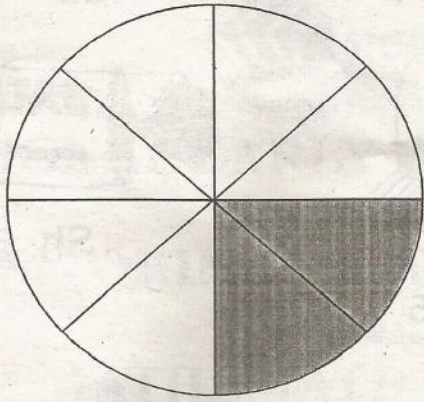
11.  $25 \div 5 =$

12.  $16 \div 4 =$




Name the fractions below

13.



\_\_\_\_\_

14.




\_\_\_\_\_

15. Work out:  $\frac{1}{8}$  of 24 =

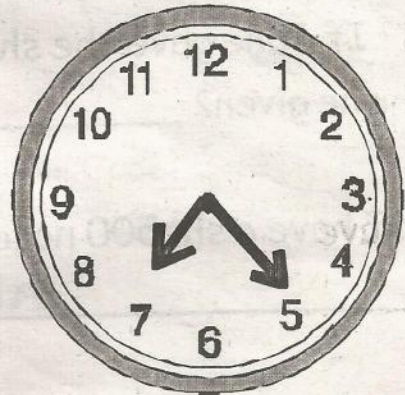
Write the time on clockfaces below using the words 'past' or 'to'

16.



\_\_\_\_\_

17.



\_\_\_\_\_

18. 12 metres + 8 metres = \_\_\_\_\_ metres

19. Kobi had a 25 metres rope. She cut 7 metres and gave her friends.  
How many metres did she remain with? \_\_\_\_\_

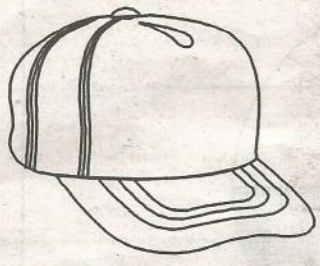
20. How many 2kg tins can fill a 14kg bucket? \_\_\_\_\_



Use the shopping list below to answer questions 21 - 22



Sh. 75



Sh. 25



Sh. 50



Sh. 15

21. How much did Jane pay after buying all the four items?

\_\_\_\_\_


22. If Jane gave the shopkeeper a sh. 200 note, how much balance was she given? \_\_\_\_\_

23. I have a sh. 500 note. How many sh. 50 notes can I get from it?

\_\_\_\_\_


Name the shapes below

24.



\_\_\_\_\_

25.



\_\_\_\_\_