


COMPETENCY BASED CURRICULUM

GRADE 4 -YEAR 2020

SOCIAL STUDIES & C.R.E



4

Name _____

Time : 2 Hours

Learners Number

Gender Boy Girl

County Name _____ County code

Sub -County Name _____ Sub-county code

School Name _____ School code

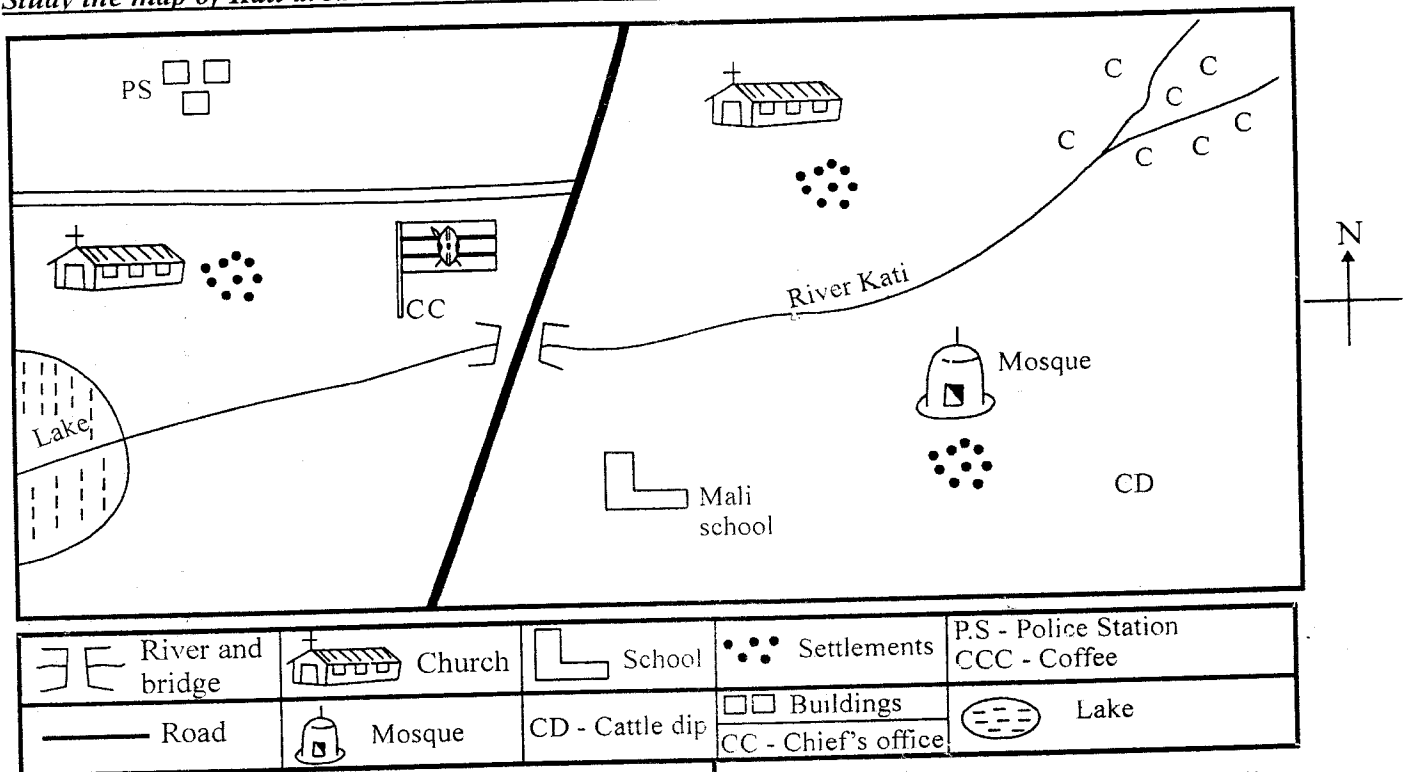
TEACHER'S SCORING GUIDE

The teacher to fill the grid below after marking the learner's work.

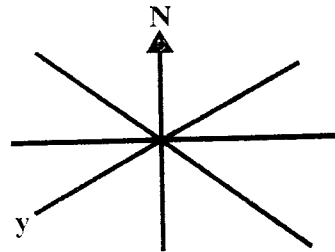
	Exceeds expectation	Meets expectation	Approaching expectation	Below expectation
SECTION A (SST)				
SECTION B (CRE)				

KATI AREA

Study the map of Kati area and use it to answer questions 1 - 4



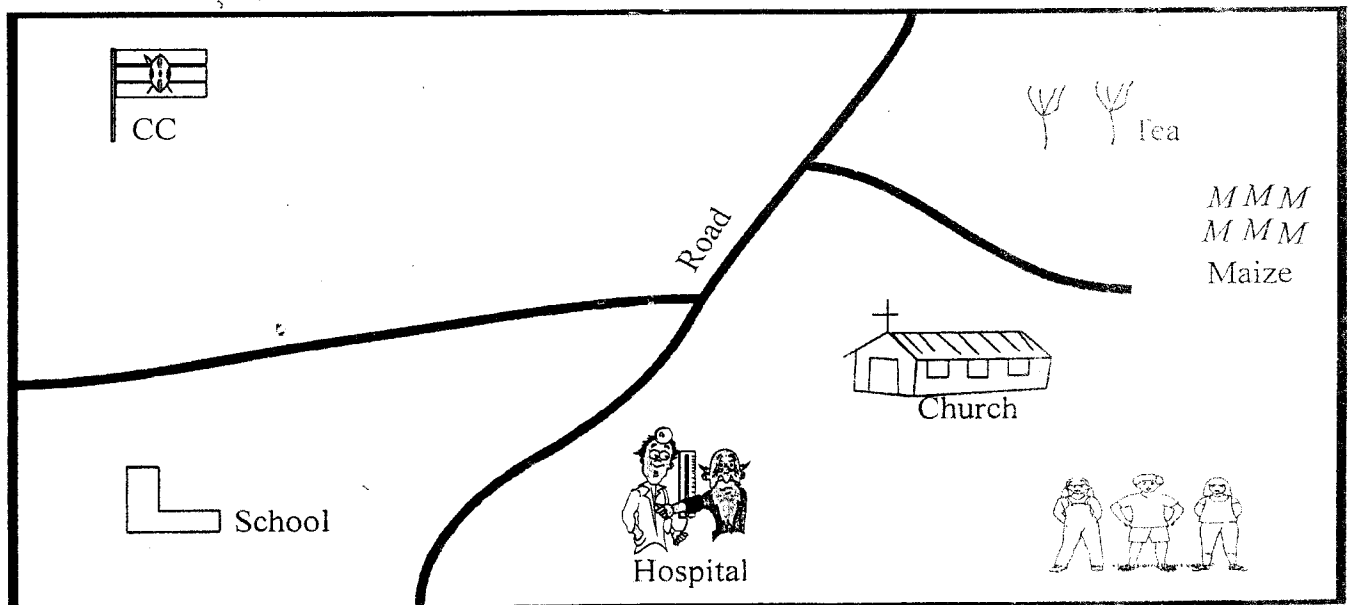
1. People in kati area get water from a _____
2. The **main** cash crop in the area is _____
3. The name of the school in kati area is _____
4. Kati area is likely to be _____
(**sub-location, location, county**)
5. River kati starts from what direction _____
6. Children you learn with in the same class and share items are your _____
7. Elijah is facing the sun in the morning. He is walking towards _____
8. An instrument used to tell the direction of one place from another is called _____
9. The sun sets to the _____
10. The other name for the four **main** points of a compass is _____
11. Mountains, rivers, lakes are all called _____ features.
12. The direction of a compass marked below is called _____



13. A person who uses compass direction to land at an airport is called _____

14. There are _____ counties in Kenya.
15. The smallest county in Kenya is _____
16. The head of a county is called _____
17. Which one of the following is the odd one out.
(bus, aeroplane, ship and curt)
18. An area with many trees is called a _____
19. Rainfall, sunshine, temperature, wind are all called _____
20. Drops of water that fall from the sky are called _____
(clouds, rain, sunshine)
21. The head of a location is called _____
22. river which flows throughout the year is called _____
23. Crops that are grown for sale are called _____
24. My father's father is my _____
25. Name one physical feature in your county.
26. Kamau is sitting facing the sun in the morning. His right hand is facing _____
27. Planting different types of crops at different times is called _____
(soil erosion, crop rotation, shifting cultivation)
28. What is the name of your county?

Use the diagram below to answer questions 29 - 32.



29. Name one economic activity in the picture _____
30. Name the two crops that are sold in the picture _____
31. The means of transport in the area is by _____
32. The roof of the houses in the picture are made of _____
(soil, grass, stones, iron sheets)
33. People come together in our county to _____
(chase one another, help one another, quarrel with one another)
34. Dairy animals are mainly kept for _____
(meat, milk, blood, mutton)
35. The people who keep law and order in our country are the _____
36. A flat area is called a _____
(valley, coast, plain)
37. A person who mends our cloths is called a _____
38. The largest county in Kenya is _____
39. Mountains, valleys, hills and rivers all are called _____ features.
40. A weather instrument used to measure the amount of rainfall is called _____

CHRISTIAN RELIGIOUS EDUCATION.

1. Human beings are special. They are created in _____ image.
2. Complete psalms 139:13 "You created every part of me, you put me together in my _____ womb.
3. Write one good thought

4. The commandment that has a promised added is

5. _____ was punished by abusing his sister sexually.
(David, Amnon)
6. Our bodies are the _____ of the Holy spirit.
7. God does not make mistakes we say He is _____
(loving, Holy)
8. When I am sad, I can control my emotions by _____
(crying, sleeping, playing)
9. The members of a nuclear family are

_____ and

10. When your friend wrong you, you should _____
(fight, abuse, forgive)