

kenyaeducators@gmail.com

ACHIEVERS EXAM

CLASS 8

SERIES 001

FOR MARKING SCHEMES CALL 0795491185

FOR MORE E-RESOURCES CALL: 0795491185

ACHIEVERS FOCUS EXAMINATION SERIES

Kenya Certificate of Primary Education (K.C.P.E)

STANDARD 8 – CODE 001 – 2020

ENGLISH SECTION A: LANGUAGE

Time: 1 hour 40 minutes

INSTRUCTIONS TO CANDIDATES (Please read these instructions carefully)

1. You have been given this question booklet and separate answer sheet. The question booklet contains 50 questions.
2. When you have chosen your answer, mark it on the **answer sheet**, not in this question booklet.

HOW TO USE THE ANSWER SHEET

3. Use only an ordinary pencil
4. Make sure you have written on the answer sheet:
Your Index Number
Your Name
Name of Your School
5. By drawing a **dark line** inside the correct numbered boxes mark your full Index Number (i.e. School Code Number and the three-figure Candidate's Number) in the grid near the top of the answer sheet.
6. Do not make any marks outside the boxes
7. Keep the sheet as clean as possible and not fold it.
8. For each of the questions 1 – 50 four answers are given. The answers are lettered A, B, C and D, in each case only **one** of the four answers is correct. Choose the correct answer.
9. On the answer sheet the correct answer is to be shown by drawing a **dark line** inside the box in which the letter you have chosen is written.

Example

In the Question Booklet:

For questions 23 to 25, choose the alternative that best completes the sentence.

23. She passed her exams very well, _____?

- A. is it
- B. did she
- C. didn't she
- D. isn't she

The correct answer is C

On the Answer Sheet:

3. [A] [B] [C] [D] **13.** [A] [B] [C] [D] **23.** [A] [B] [C] [D] **33.** [A] [B] [C] [D] **43.** [A] [B] [C] [D]

10. Your **dark line** *must* be within the box.
11. For each question **only one** box is to be marked in each set of four boxes.

Website: www.achieversfocus.co.ke

Email: wegopublish@gmail.com

Questions 1 to 15.

Read the passage below and fill the blank space numbered 1 – 15 with the suitable choices given.

However __1__ if we become open minded and refuse __2__ blindly follow rumours, and instead try to __3__ more __4__ them, then we shall confirm or refute them __5__. We can also choose to __6__ them. That way we remain __7__ and __8__ our goals in life. __9__ every individual __10__ to get busy working constructively.

- | | | | |
|--------------------|---------------|---------------|----------------|
| 1. A.! | B. - | C. , | D. ; |
| 2. A. to | B. for | C. in | D. about |
| 3. A. finding | B. find out | C. found | D. find in |
| 4. A. of | B. with | C. at | D. about |
| 5. A. all together | B. altogether | C. altogether | D. or together |
| 6. A. ignored | B. ignoring | C. ignorant | D. ignore |
| 7. A. focussed | B. foccused | C. focused | D. foccussed |
| 8. A. archieve | B. achieve | C. achieve | D. archeive |
| 9. A. But | B. And | C. Therefore | D. Or |
| 10. A. need | B. needs | C. needed | D. kneads |

It is unfortunate when young people __11__ idling around __12__ working. Laziness __13__ a nation. We must __14__ that whereas we use a lot of energy to work, it is a positive __15__ to the society.

- | | | | |
|-------------------|-----------------|----------------|----------------|
| 11. A. preferred | B. prefer | C. preferred | D. prefers |
| 12. A. to | B. in | C. at | D. for |
| 13. A. destroy | B. destroys | C. destroyed | D. destroying |
| 14. A. appreciate | B. apprite | C. apprecite | D. appreciate |
| 15. A. contribute | B. contribution | C. contributes | D. contributed |

For questions 16 and 17, give the opposite of the underlined word.

16. Pretenders are worse than murderers.
A. good
B. better
C. worst
D. best
17. Idleness cannot help you to achieve your dreams
A. avoid
B. assist
C. hinder
D. get

In question 18 and 19 choose the alternative that means the same as the underlined words.

18. James likes blowing his own trumpet.
A. Spreading rumours
B. Using his own trumpet when singing
C. Praising his own abilities and achievements
D. Shouting when explaining something

In question 19 – 21, choose the correct alternative to fill the blank spaces.

19. I find it difficult to _____ with untidy classroom.
A. put in
B. put up
C. put off
D. put out
20. Joel is _____ boy
A. handsome, a tall Kenyan, black
B. a Kenyan tall black, handsome
C. a tall Kenyan black handsome
D. a handsome tall black Kenyan
21. Hardly had I reached home
A. and I felt tired
B. but I felt tired
C. when I felt tired
D. so as I felt tired

Choose the best alternative to fill in the blank space.

22. I like reading, _____
A. don't I?
B. isn't it?
C. do I?
D. isn't I?
23. The earth moves round the sun, _____
A. can it?
B. can't it?
C. doesn't it?
D. does it?

In question 24 and 25, choose the sentence in correct English.

24. A. I prefer milk to porridge.
B. It is advisable to helping the needy.
C. The child is suffering of malaria.
D. Yesterday I go home early.
25. A. We comes to school with the bus.
B. This is yours letter.
C. We come to school on a bus.
D. I wish you success for your examinations.

Read the following passage and answer questions 26 to 38.

The fox has been said to be the most intelligent of all four-footed animals. It is the smallest member of the dog family. Other animals in the dog family include the wolf, the hyena, the coyote and the dingo of Australia. Foxes have short legs and a long and bushy tail. They mainly live in forests. They can be found in places like America, Eurasia and Africa.

There are many types of foxes. The most common is the red fox. It is so called because of a shade of red on its hairs. The grey fox is another kind of fox. It is smaller than the red fox. They have grey hair. They are the only members of the dog family that climb trees. The swift fox runs fast. It is also nocturnal. The arctic fox is found in the Arctic. It has a coat that is white in winter and brown during the warm seasons.

Foxes feed mostly on rabbits, mice, birds' eggs, insects and native fruits. They also feed on animal carcasses. The fox has sharp hearing ability and can see and smell its unsuspecting prey. The fox slowly follows its unsuspecting prey and **pounces** on it. The fox has eyes which become smaller in strong light and bigger in darkness. This enables the animal to hunt at night.

Usually, foxes get their own lair by burrowing just as a rabbit does. However, most frequently, it steals burrows from other animals and occupies them. The cunningness and shyness of the animal is seen by the number of exits to its den. As many as ten bolt-holes from the fox's den have been counted. This feature of the Reynard led to the saying '*as cunning as a fox*'.

26. The difference between a dog and a fox is that

- A. a fox has a longer bushy tail
- B. a dog has a longer bushy tail
- C. a dog is faster than a fox
- D. a fox does not live in a den

27. a fox is able to hunt at night because

- A. it is a four-footed animal
- B. its eyes are able to contract during the day
- C. it has short legs
- D. its eyes are able to expand in darkness

28. the fox is also referred to as

- A. eurasia
- B. coyote
- C. dingo
- D. Reynard

29. According to the passage, the bolt-holes are used as

- A. escape exits
- B. hiding places
- C. houses
- D. hunting routes

30. Which of the following does not describe the fox well?

- A. Are four-footed
- B. Have a bushy tail
- C. Have grey hair
- D. Have sharp smelling senses

31. What is true about foxes according to the passage?

- A. Their eyes become smaller in darkness
- B. They eat poorly
- C. They belong to the dog family
- D. They are the most intelligent animals on earth

32. Which fox turns brown in summer?

- A. African fox
- B. Nocturnal fox
- C. Grey fox
- D. Arctic fox

33. The word **pounces** as used in the passage means

- A. follows
- B. leaps
- C. hunts
- D. climbs

34. The fox can hunt at night because

- A. it can see in the dark
- B. it burrows like a rabbit
- C. it gets hungry
- D. it is in the dog family

35. The following are names of where foxes live except

- A. nocturnal
- B. lair
- C. burrow
- D. den

36. As *cunning* as a fox can also mean

- A. as small as a fox
- B. as swift as a fox
- C. as sly as a fox
- D. as hungry as a fox

37. How many types of foxes have been mentioned in the passage?

- A. One
- B. Two
- C. Four
- D. Eight

38. The best summary of the above passage would be?

- A. The fox
- B. The fox and other stories
- C. The fox and other four-footed animals
- D. How a fox survives in the forest

Read the following passage and then answer question 39-50

People who have friends are happier and healthier than those without. Therefore, it is important to think of how you can keep the friends that you have and how to make new ones. They say that people with close friends have greater ability to fight illness than those who are solitary.

Friendship needs to be cultivated. Find time to be with your friends even if it means putting off something you would like to do. People are more important than things and relating well with other people brings much joy to be with your friends, keep contact through letters or the telephone.

We should be open to our close friends. This means that we should be willing to share our inner feelings with them. Tell them about your fears and worries, your hopes and desires. Why we do this? Because we should be free to be ourselves before our true friends. In other words, we don't fear that we will be misunderstood. Friends should accept us just the way we are and encourage us to overcome our weakness. After all, none of us is perfect.

Similarly, listen to your friends when they have problems but offer advice only when it is wanted. Do not impose your will on others. Encourage them to do what is best for them and be there for them through difficult times.

Different friends for different activities are important. This broadens one's outlook and enriches one's life. Showing sincere interest in what other people are doing draws them to you.

A friend should be assisted when they fall sick without waiting for them to ask for a favour. It is not easy to maintain a friendship but it is worth the effort. If you are friendly, kind and considerate, people will be attracted to you. Talk to strangers and people who seem lonely.

Do not take friendship for granted. Do things that will strengthen it and avoid habits that kill friendship. If you lie and gossip about your friends, they will soon begin treating you like a leper. So, do for your friends what you would like them to do for you. Laugh with them when they are happy, celebrate their success and weep with them when they are sorrowful. Remember, without friends, life would be unbearable.

39. The first paragraph emphasizes on
- being happy and healthy through others
 - having friends and making new ones
 - what has been discovered about friends
 - what we can do to fight illnesses
40. It is suggested that people with close friends
- rarely fall sick
 - are better than those who are solitary
 - have realized the value of friendship
 - are less likely to get sick than others
41. 'Friendship needs to be cultivated'. This means
- friendship is similar to farming
 - we need to think carefully about friendship
 - we need to work hard in order to keep friends
 - friendship brings good things just like plants
42. Which of the following means the same as 'putting off'?
- Postponing
 - Forgetting
 - Avoiding
 - Extinguishing
43. Why do you think the writer says that people are more important than things?
- Relating well with people needs effort
 - Things cannot really help you
 - Things cannot meet certain human needs
 - You cannot buy relationship
44. A true friend is
- one who listens to us no matter what we say
 - one who encourages us to overcome our weaknesses
 - one who knows he or she is not perfect
 - one who knows our fears and weaknesses and still accepts us
45. We should listen to our friends but we must not
- make decisions for them
 - offer them any advice
 - let them suffer alone
 - ask them to do bad things
46. 'Be there for them' means
- give them some time
 - be willing and available to help
 - do not be far from your friends
 - have a kind heart
47. Why should we have different types of friends?
- We can do many different things together
 - They help us to learn many things about life
 - We can sing or play games together
 - They may help us to get wealth
48. Which of the following statement is not true?
- One who wants to make friends must be friendly and kind
 - People are drawn to those who show interest in them
 - Being considerate is important in friendships
 - It is quite easy to maintain a friendship

49. To be treated like a leper means to be
- A. hated and isolated
 - B. without any friends
 - C. avoided by others
 - D. considered dangerous
50. The best summary of this passage is
- A. friends should not take each other for granted
 - B. it is good to speak honestly to your friends
 - C. true friendship is wonderful but it requires much effort
 - D. friends need us, especially during hard times

ACHIEVERS FOCUS EXAMINATION SERIES

Kenya Certificate of Primary Education (K.C.P.E)
STANDARD 8 – CODE 001 – 2020

ENGLISH SECTION B: COMPOSITION

Time: 40 minutes

YOUR INDEX NUMBER	
YOUR NAME	
NAME OF YOUR SCHOOL	

READ THESE INSTRUCTIONS CAREFULLY

1. In the spaces provided above write your full Index Number, your Name and the Name of your school.
2. Now open the paper, read the composition subject carefully and write your composition on the lines provided.

Website: www.achieversfocus.co.ke
Email: wegopublish@gmail.com

ACHIEVERS FOCUS EXAMINATION SERIES

Kenya Certificate of Primary Education (K.C.P.E)

DARASA LA NANE – KODI 001 – 2020

KISWAHILI SEHEMU YA KWANZA LUGHA Muda: Saa 1 Dakika 40

SOMA MAAGIZO YAFUATAYO KWA MAKINI

1. Umepewa kijitabu hiki cha maswali na karatasi ya kujibia. Kijitabu hiki kina maswali 50.
2. Ukisha kuchagua jibu lako lionyeshe katika **karatasi ya majibu** na wala **sio** katika kijitabu hiki cha maswali.
3. Tumia penseli ya kawaida.
4. Hakikisha ya kwamba karatasi ya majibu uliyopewa imejumuisha yafuatayo:
Namba Yako Ya Mthani
Jina Lako
Jina La Shule Yako
5. Usitie alama zozote nje ya visanduku.
6. Iweke safi karatasi yako ya majibu na usikunje.
7. Kwa kila swali 1 – 50 umepewa majibu manne. Majibu hayo yameonyeshwa kwa herufi A, B, C, D. Ni jibu **moja** tu kati ya hayo manne ambalo ni sahihi. Chagua jibu hilo.
8. Kwénye karatasi ya majibu, jibu sahihi lionyeshe kwa kuchora kistari katika kisanduku chenye herufi uliyochagua kuwa ndilo jibu.

Mfano

Katika Kijitabu cha Maswali:

21. Chagua jibu lenye ala za muziki pekee.
- A. filimbi, udi, mvukoto, chapuo
 - B. njuga, tari, kinubi, fidia
 - C. harimuni, marimba, msondo, maleba
 - D. siwa, zeze, upatu, nembo
- Jibu sahihi ni B

Katika Karatasi ya Majibu:

1 [A] [B] [C] [D] **21** [A] [B] [C] [D] **21** [A] [B] [C] [D] **31** [A] [B] [C] [D] **41** [A] [B] [C] [D]

Katika visanduku vinavyoonyesha majibu ya swali namba 21, kisanduku chenye herufi B ndicho kilichochoywa kistari.

9. Chora kistari chako vizuri. Kistari chako kiwe **cheusi** na kisijitokeze nje ya kisanduku.
10. Kwa kila swali, chora kistari katika kisanduku **kimoja tu** kati ya visanduku vinne ulivyopewa.

Website: www.achieversfocus.co.ke
Email: wegopublish@gmail.com

Swali 1 mpaka 15.

Soma vifungu vifuatavyo. Vina nafasi 1 mpaka 15. Kwa kila nafasi umepewa majibu manne. Chagua jibu lifaalo zaidi kati ya yale uliyopewa.

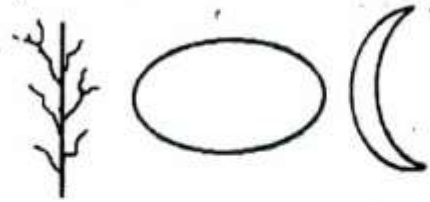
Kilimo au zaraa kama __1__ ni ule __2__ wa mimea au __3__ wa wanyama na pia ndege. Mkulima anaweza kuwa __4__ wa kukuza mboga kama vile michicha, kabeji na __5__ au awe __6__ wa ufugaji wa ng'ombe, kondoo, mbuzi au ngamia kama __7__ ili __8__ matakwa yake. Mkulima stadi __9__ bila shaka __10__ siri maalum __11__ kazi yake. Yeye huelewa sana jinsi ya __12__ hali za anga na kujua wakati __13__ wa kulima, kupanda, kupalilia na ule wa __14__ mimea yake dawa __15__.

- | | | | |
|---------------------|------------------|------------------|-----------------|
| 1. A. kijulikanavyo | B. vijulikanavyo | C. iujulikanavyo | D. ijulikanavyo |
| 2. A. unawirishaji | B. ustawishaji | C. uendelezaji | D. upaliliaji |
| 3. A. ufungaji | B. ufujaji | C. ufugaji | D. ufuaji |
| 4. A. mhatari | B. mgwiji | C. hodari | D. zuzu |
| 5. A. nyinginezo | B. nyingine | C. mingine | D. mingineyo |
| 6. A. mjusi | B. mchuzi | C. mchuuzi | D. mjuzi |
| 7. A. kitegauchumi | B. kutegauchumi | C. kitekachumi | D. kitegaujumi |
| 8. A. kukithi | B. kukidhi | C. kudhiki | D. kuakisi |
| 9. A. wowote | B. yeyote | C. yoyote | D. lolote |
| 10. A. ataelewa | B. ameelewa | C. akaelewa | D. huelewa |
| 11. A. za | B. wa | C. la | D. cha |
| 12. A. kutabiri | B. kutambua | C. kuelezea | D. kubashiri |
| 13. A. afiki | B. muawana | C. mwafaka | D. nafaka |
| 14. A. kunyunyisa | B. kunyunyizia | C. kunyunyisha | D. kunyunyishia |
| 15. A. yafaayo | B. kifaacho | C. zilizofaa | D. zifaazo |

Kutoka swali la 16 – 30, chagua jibu sahihi.

16. Neno Ng'ombe lina sauti ngapi?
A. 5
B. 8
C. 4
D. 6
17. Wanyama alicheza vizuri kisha akatuzwa viatu vizuri. Neno vizuri limetaumika vipi?
A. Kivumishi, kielezi
B. Kielezi, kiwakilishi
C. Kielezi, kivumishi
D. Kivumishi, kiwakilishi
18. Wakati wa jua la utosi ni?
A. Alasiri
B. Adhuhuri
C. Machweo
D. Mafungianyama
19. Lipi ambalo ni neno baki katika orodha?
A. Wengu
B. Kongosho
C. Figo
D. Nyongani
20. Asha na Zawadi wameolewa na bwana Kasavuli hivyo Aisha na Zawadi wataitana?
A. Mwanyumba
B. Kivyere
C. Wakewenza
D. Mwamu
21. Kitenzi lia katika kauli ya kutendesha ni?
A. Lilisha
B. Lisha
C. Liliwa
D. Liza
22. Bunge la kitaifa liko mkabala wa bunge la Seneti. Maneno yaliyopigwa mstari ni?
A. Kihusishi
B. Kielezi
C. Kihisishi
D. Kiarifa

23. Maumbo yafuatayo ni?



- A. Piashinda, duara, mwezi mwandamo
B. Ngoe, hilali, tao
C. Mstari sambamba, duaradufu hilali
D. Ngoe, geli, tao
24. Vijana wa mtaani waliambulia kufanya kazi ya msragambo. Maana ya kazi ya msragambo ni?
A. Kazi ya kibarua
B. Kazi ya suluhu
C. Kazi ya watu wengi
D. Kazi ya mapato madogo
25. Ipi katika sentensi zifuatazo iko katika wakati tegemezi ya kukanusha?
A. Yeye hupenda wali kwa kuku
B. Angewasili sherehe ingeanza
C. Asingetajwa asingetiwa mbaroni
D. Bi Maliwaza hatawasili leo
26. Kanusha sentensi ifuatayo
Alikuwa akala
A. Hakuja na hakula
B. Alikuwa lakini hakula
C. Hakuja na akala
D. Hakuja wala hakula
27. Majina haya yanapatikana katika ngeli gani?
Ukuta, waraka, unyusi, ubavu
A. U-YA
B. U-U
C. U-Zi
D. U-I
28. Chai ya mkandaa ni rangi ipi?
A. Hudhurungi
B. Zambarau
C. Nili
D. Waridi

29. Andika sentensi ifuatayo katika usemi taarifa

'Njoo hapa nikutume dukani,' mjomba alimwambia Kulecho

- A. Mjomba alimwambia Kulecho njoo hapa nikutume dukani
- B. Mjomba alimtaka Kulecho atumwe dukani
- C. Mjomba alimwambia Kulecho aende pale atumwe dukani.
- D. Mjomba alimwambia Kulecho atamtuma dukani pale

30. Nywele ziotazo katika mdomo na pua hasa kwa wanaume huitwa?

- A. Sharafa
- B. Masharubu
- C. Nyusi
- D. Kope

Soma kifungu kifuatacho kisha ujibu maswali 31 – 40.

Matumizi mabaya ya mazingira yameleta uharibifu mkubwa kwa mchanga. Matumizi hayo huuharibu udongo wa juu juu wenye rutuba na kuacha ukiwa tasa. Katika nchi yetu, takriban nusu ya nchi ni mazingira ya jangwajangwa. Watu waishio kwenye sehemu hizo ni 700,000 tu kutoka kwa jumla ya idadi ya kama 30,000,000. Wananchi wanaoishi huko ni wafugaji wa mifugo ambao huhamahama. Wengine huishi kwa kukusanya vyakula wanavyokula kutoka porini.

Makabila ya watu hao wanaoishi kwa kuhamahama bado wanafuata maisha yao ya kitamaduni ya tangu zama. Mojawapo ya makabila haya ni Warendile. Watu hawa hutembea mwendo wa kilomita kama hamsini kwa siku, pamoja na ngamia wao, wakitafuta malisho mapya. Ngamia hutoa maziwa kiasi cha mara tatu yale ya ng'ombe. Haya makabila hujitengenezea makao yaliyo rahisi kubomoa na kubebwa wakati wanapohama.

Kabila la Wasamburu hufuga ng'ombe. Ng'ombe na ngamia wana malisho tofauti. Ng'ombe hula nyasi nao ngamia hula majani ya miti kwa hivyo wanyama hawa hawashindanii malisho.

Mifugo hao ni kiini cha uchumi wa wafugaji hao. Huwapa maziwa, damu, nyama kwa chakula chao. Ngozi zao hutumiwa kwa kutengenza vibuyu hivyo vya kubebea maziwa au maji, mapambo na viatu. Nacho kinyesi chao hutumika kama kuni za kukoea moto na pia kwa kuezekea paa na kutunza nyumba zao sakafuni.

Hiyo ndiyo mazingira ya jangwa au nusu jangwa ya nchi yetu. Mtu anapoingia ndani zaidi anapambana na jangwa lenyewe hasa, ambapo mazingira ni kame.

Mazingira yawe ya jangwa au yasiwe hivyo, yote yanahitaji kutunzwa na binadamu. Watu wote wanastahili kuungana katika jambo hili kwa njia mbalimbali pepote walipo na kwa wakati wote.

31. Sentensi ipi inaelezea jinsi mazingira yetu ni maisha yetu?

- A. Mazingira yanayotegemea maisha
- B. Viumbe vyote vinavyotunza maisha
- C. Bila viumbe mazingira ni bure
- D. Maisha ya viumbe hutegemea mazingira

32. Taja aina ya jangwa.

- A. Jangwa la Sahara la Afrika
- B. Jangwa la Barafu na Theluji duniani
- C. Jangwa la Ukame na baridi kali
- D. Jangwa la Warendille na Wasamburu

33. Kwenye majangwa makavu mvua hunyeshwa

- A. baada ya muda
- B. kwa nadra sana
- C. mara kwa mara
- D. kwa muda mrefu

34. Theluji na barafu hutokana na nini?

- A. Joto na upepo
- B. Ukame na joto
- C. Baridi na maji
- D. Upepo na ukame

35. Kutamalaki kwa jangwa ni?

- A. Kupanuka
- B. Kudidimia
- C. Kupungua
- D. Yote hayo

36. Ni kiumbe gani ambacho hudhuru mazingira zaidi kuliko vyote?

- A. Mwanadamu
- B. Ngamia
- C. Mfugo
- D. Ng'ombe

37. Kwa nini sehemu Fulani za Kenya zina msongamano wa watu ingawa nchi yetu ni kubwa?

- A. Kwa vile watu ni wengi sana
- B. Kwa sababu ardhi ni ndogo
- C. Kwa kuwa watu wanahamama
- D. Kwa ajili sehemu kubwa ni jangwa

38. Wanyama wafugwao jangwani huwafaaje wafugaji wao?

- A. Kwa kuhamama
- B. Kwa kubeba mizigo
- C. Kwa chakula na mavazi
- D. Kwa mapambo na viatu

39. Kwa nini makabila ya jangwani hayajengi nyumba za kudumu?

- A. Hawana pesa za kutosha
- B. Hufuata mila zao za kale
- C. Hawakai mahali pamoja
- D. Huishi kwa kutegemea mifugo

40. Kuna tofauti gani ya sehemu ya jangwajangwa na ile ya jangwa?

- A. Sehemu moja ni kama zaidi ya ile nyingine
- B. Jangwajangwa si kama kama jangwa
- C. Jangwa ni kavu zaidi ya jangwajangwa
- D. Hatujaambiwa

Soma taarifa kifuatacho kisha ujibu maswali 41 – 50.

Vita vya kupambana na janga la UKIMWI ni vya watu wote duniani. Watu wote wanapaswa kushiriki ili kumshinda nduli huyu. Mapambano hayo ni ya namna mbalimbali.

Tutapambana na adui UKIMWI kwa njia ya kujielimisha kuhusu ueneaji wake, dalili zake na malibabu yake. Watu wote wameshaelezwa mengine juu ya hayo yote. Mapambano mengine muhimu sana ni kuhusu utunzaji wa wagonjwa wa'iolemewa na ugonjwa wa UKIMWI. Maadamu kwa sasa bado ugonjwa huu hauna dawa, ni wazi kuwa wale wote walioambukizwa, baadaye walazoroleka sana na kuhitaji msaada wa watu wengine.

Je utamsaidia mama au baba yako, dada au kaka, ndugu au jamaa, rafiki, jirani au mtoto wako? Watu hao wanakohitaji katika muda huo wa mateso makali. Hatua ya kwanza ya kuwatunza wagonjwa hao ni kukaerua nao na kuwaonyesha upendo na huruma. Tusiwaache peke yao. Tusiwatenge, tusiwalaumu. Tukae nao kulingana na maagizo ya daktari.

41. Vita vya kupambana na ugonjwa wa UKIMWI ni vya kina nani?
 A. Vijana
 B. Wazee
 C. Wataalam wa afya
 D. Binadamu wote ulimwenguni
42. Ushindi dhidi ya adui huyu utapatikana kwa njia zipi?
 A. Kujulishana na kuelimishana
 B. Kupendana na kutembeleana
 C. Ushirikiano
 D. Uelewano
43. Kufikia sasa ni idadi gani ya watu ambao hawajapata kusikia hatari zozote kuhusu janga la UKIMWI?
 A. Hapana yeyote
 B. Asilimia kumi
 C. Pengine ni wachache sana
 D. Takribani wote
44. Je dawa ya UKIMWI ni nini?
 A. Sindano
 B. Haijagunduliwa
 C. Haijatayarishwa
 D. Vidonge
45. Kuzoroteka ni kufanya nini?
 A. Kuwa dhaifu
 B. Kuwa mwembamba
 C. Kukosa maarifa
 D. Kukosa marafiki
46. Ni nani anaweza kuambukizwa UKIMWI?
 A. Mtu wa makamu
 B. Mtu yeyote
 C. Vijana marafiki
 D. Watoto wachanga
47. Kumwonyesha mgonjwa wa UKIMWI huruma na upendo ni kinyume cha hali gani?
 A. Kumjali na kumsaidia
 B. Kumtembelea na kumwamkua
 C. Kumlaumu na kumlunza
 D. Kumtenga na kumbagua
48. Chakula cha lishe ya hali ya juu ni kipi?
 A. Ni cha kumfaa mwilini
 B. Ni cha kumchangamsha
 C. Ni cha kumwongezea damu
 D. Ni cha bei ghali
49. Pamoja na matibabu na chakula ni uzingatiaji wa hali ipi unaoweza kumfanya mgonjwa ajiskie nafuu zaidi?
 A. Mazungumzo
 B. Usafi
 C. Mapambo
 D. Kimya
50. Ni nini maana ya heshima ya binadamu?
 A. Kuwa mtu
 B. Kujiskia mzima
 C. Kutojichukia
 D. Kutojiamini

ACHIEVERS FOCUS EXAMINATION SERIES

Kenya Certificate of Primary Education (K.C.P.E)

DARASA LA NANE – KODI 001 – 2020

KISWAHILI SEHEMU YA PILI INSHA

Muda: Dakika 40

NAMBA YAKO YA MTIHANI	
JINA LAKO	
JINA LA SHULE YAKO	

SOMA MAAGIZO YAFUATAYO KWA MAKINI.

1. Kwenye nafasi zilizoachwa hapo juu, andika Namba yako kamili ya mthani, Jina lako na Jina la Shule yako.
2. Sasa geuza ukurasa huu. Soma kichwa cha insha kwa makini kisha uandike insha yako kwenye nafasi ulizoachiwa.
3. Insha **lazima** iandikwe kwa lugha ya Kiswahili.

Website: www.achieversfocus.co.ke

Email: wegopublish@gmail.com

Handwriting practice lines consisting of multiple rows of dotted lines on a white background.

kenyaeducators@gmail.com

FOR MORE E-RESOURCES CALL: 0795491185

ACHIEVERS FOCUS EXAMINATION SERIES

Kenya Certificate of Primary Education (K.C.P.E)
STANDARD 8 – CODE 001 – 2020

MATHEMATICS

Time: 2 hours

READ THESE INSTRUCTIONS CAREFULLY

1. You have been given this question booklet and separate answer sheet. The question booklet contains 50 questions.
2. Do any necessary rough work on this booklet.
3. When you have chosen your answer, mark it on the **answer sheet**, not in this question booklet.

HOW TO USE THE ANSWER SHEET

4. Use only an ordinary pencil.
5. Make sure you have written on the answer sheet:
Your Index Number
Your Name
Name of Your School
6. By drawing a **dark line** inside the correct numbered boxes mark your full Index Number (i.e. School Code Number and the three-figure Candidate's Number) in the grid near the top of the answer sheet.
7. Do not make any marks outside the boxes
8. Keep the sheet as clean as possible and not fold it.
9. For each of the questions 1 – 50 four answers are given. The answers are lettered A, B, C and D. in each case only **one** of the four answers is correct. Choose the correct answer.
10. On the answer sheet the correct answer is to be shown by drawing a **dark line** inside the box in which the letter you have chosen is written.

Example

In the Question Booklet:

11. What is the value of $\frac{6(24-18)+6 \times 4}{6}$

- A. 30
- B. 25
- C. 10
- D. 28

The correct answer is C (10)

On the Answer Sheet:

1 [A] [B] [C] [D] **11** [A] [B] [C] [D] **21** [A] [B] [C] [D] **31** [A] [B] [C] [D] **41** [A] [B] [C] [D]

11. Your **dark line must** be within the box.
12. For each question only **one** box is to be marked in each set of four boxes.

Website: www.achieversfocus.co.ke
Email: wegopublish@gmail.com

1. What is twenty six million two hundred and eight thousand and sixty less four hundred and twenty thousands in figures?

A. 2620440
 B. 26628060
 C. 25788060
 D. 25860060

2. Find the value of digit 4 in the product of 0.24 and 210.

A. Tenths
 B. Four tenths
 C. Hundreds
 D. Four

3. Find the sum of the smallest and the largest number that can be formed from the digits:

6, 1, 0, 9, 5.

A. 94941
 B. 95941
 C. 98079
 D. 107079

4. Find the capacity of a cylinder in litres if the base area is 616cm^2 and it has a height of 20cm.

A. 12320
 B. 123200
 C. 102320
 D. 12.32

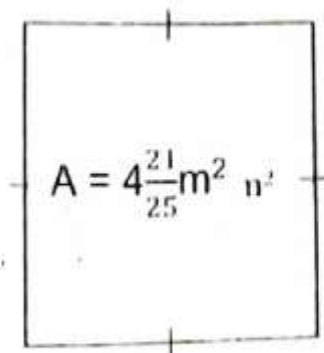
5. Round off 16499 to the nearest ten thousand.

A. 16000
 B. 16500
 C. 20000
 D. 27000

6. Work out: $20.005 \div 50$


A. 40001
 B. 0.4001
 C. 4.001
 D. 0.04001

7. The area of the square below is $4\frac{21}{25}\text{m}^2$. Calculate its perimeter.



A. $8\frac{4}{5}\text{m}$
 B. $19\frac{9}{25}\text{m}$
 C. $2\frac{1}{5}\text{m}$
 D. $4\frac{2}{5}\text{m}$

8. What distance was covered by an athlete who made 8 laps round the track in km?



A. 128
 B. 12.8
 C. 6.72
 D. 840

9. Work out: $720 \div (120 \times 6) + 22 \times 8 - 120 \div 20$

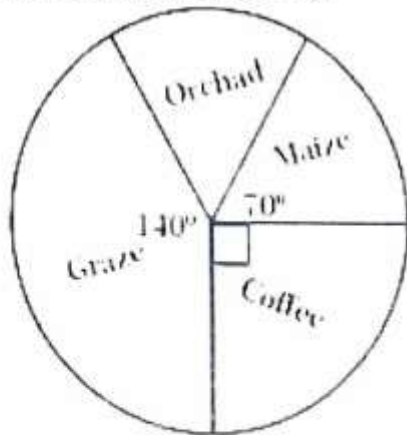
A. 450
 B. 900
 C. 171
 D. 2250

10. What is the value of x in: $\frac{4x-6}{10} + \frac{4}{5} = 9$

A. 20
 B. 19.5
 C. 23.5
 D. 22

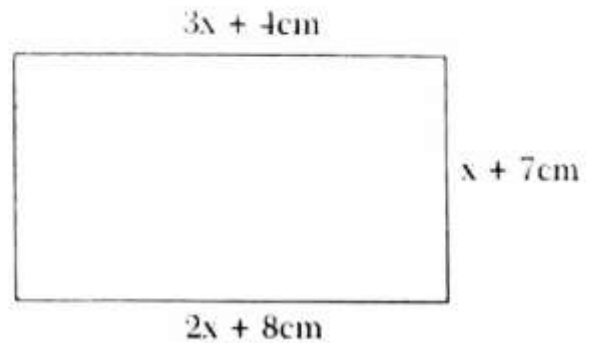
11. Work out $\frac{6.25 \times 0.48 \times 0.32}{1.6 \times 2.4 \times 1.25}$
- A. 2
B. 0.2
C. 0.02
D. 0.002

12. The pie-chart below shows how Madam Ann utilized her 72ha piece of land. How many more hectares were used for maize than the orchard?



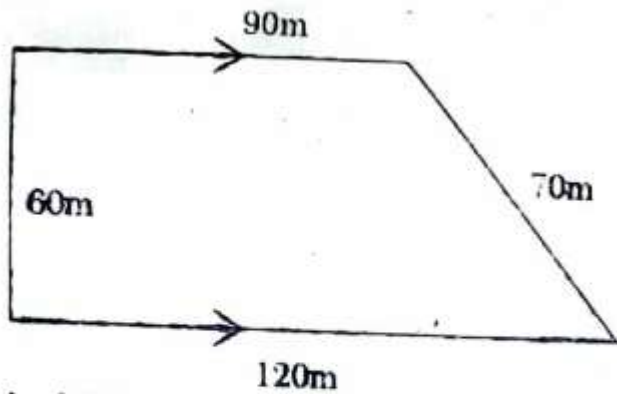
- A. 4
B. 6
C. 2
D. 14
13. What is the least number that can be subtracted from 60260 to make it divisible by 11?
- A. 1
B. 2
C. 4
D. 9
14. What is the product of the L.C.M and the G.C.D of 6, 12 and 15?
- A. 180
B. 3
C. 60
D. 63
15. A meeting started at 2240hrs on Saturday. If it took $3\frac{1}{5}$ hrs, at what time and day did it end?
- A. 0055hrs Sunday
B. 1352hrs Sunday
C. 1.52a.m Sunday
D. 1.52pm Sunday

16. Calculate the distance round the figure below.

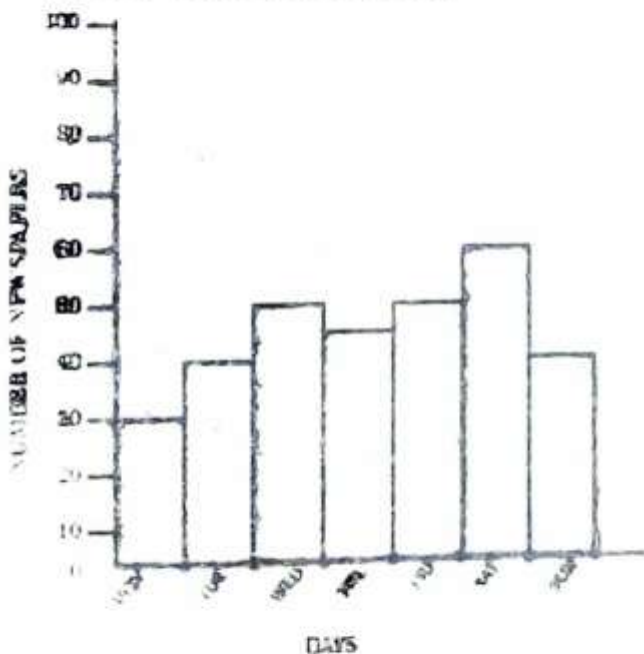


- A. 54cm
B. 49cm
C. 88cm
D. 176cm
17. What is the value of:
- $$\frac{2}{3} \times \frac{1}{5} \text{ of } 30 \div 2 - 6 + \frac{1}{2} \text{ of } 8$$
- A. 0
B. 4
C. 2
D. 1
18. A road measuring 5km on the ground is represented on a map by a line measuring 25cm. Calculate the scale on the map.
- A. 1:20000
B. 1:2
C. 1:200
D. 1:200000
19. David sold a jacket for sh.1080 and made a 10% loss. Find the buying price of the jacket.
- A. Sh.1560
B. Sh.960
C. Sh.1440
D. Sh.1200

20. Calculate the area of the figure below in ha.



- A. 0.63
 B. 63
 C. 630
 D. 6.3
21. A packet of salt weight 125g. How many such packets will be needed to make a total of 1.2 tons?
- A. 96000
 B. 9600
 C. 960
 D. 96
22. The bar graph below shows the number of newspapers a news vendor sold over a week.

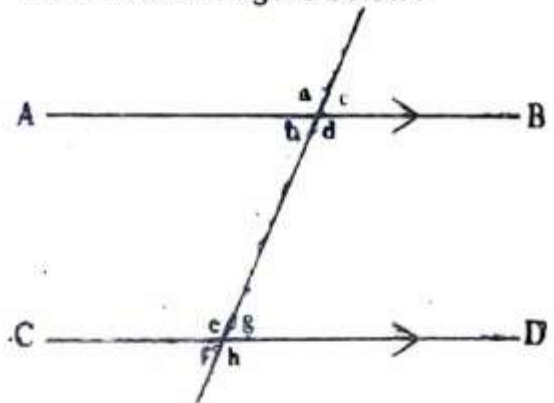


If a newspaper costs sh.40, how much money did the vendor get from the sales from Wednesday to Saturday?

- A. Sh.8400
 B. Sh.7940
 C. Sh.8000
 D. Sh.8200

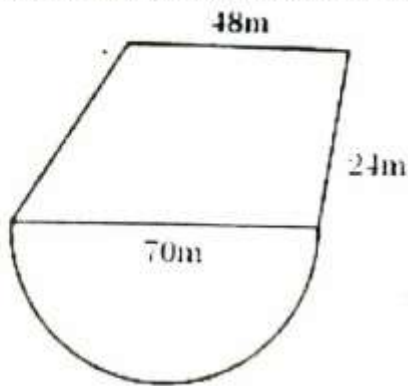
23. In a school, each pupil takes a 2dl packet of milk 2 days per week. How many litres of milk will 130 pupils take in 3 weeks?
- A. 1.56
 B. 156
 C. 15.6
 D. 1560

24. Which of the following statements is true about the figure below?



- A. $a + g + f + h = 360^\circ$
 B. $d + e = 180^\circ$
 C. $a + d = g + f$
 D. $b = h$
25. A school planted 2800 tree seedlings in the year 2008. This was a 40% increase on the seedlings planted in the year 2007. How many tree seedlings were planted in 2007?
- A. 4200
 B. 7000
 C. 2000
 D. 1120
26. Peter borrowed sh.40000 from a bank which charged a simple interest at the rate of 5% p.a. If he paid the money back after the end of 5 years, how much did he pay altogether?
- A. Sh.50000
 B. Sh.8000
 C. Sh.10000
 D. Sh.48000

27. The figure below represents Joram's homestead. Find its area in Ares.

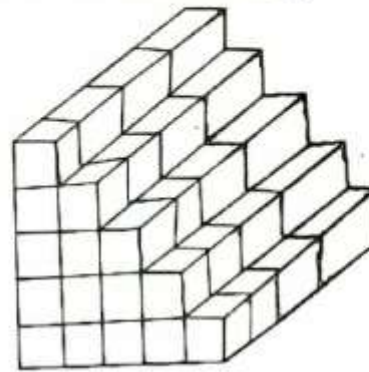


- A. 33.41
 B. 0.3341
 C. 3341
 D. 3.341
28. Six people can do a piece of work in 12 days. How many more days will it take four people working at the same rate take to complete the work?
 A. 6
 B. 8
 C. 4
 D. 18
29. What is the complement of $37\frac{1}{4}^\circ$.
 A. $53\frac{1}{4}^\circ$
 B. $52\frac{3}{4}^\circ$
 C. $142\frac{3}{4}^\circ$
 D. $143\frac{1}{4}^\circ$
30. Solve:
 $(16905 - 1500 + 1025 - 1225) \div 5$
 A. 2631
 B. 3041
 C. 3121
 D. 15205

$$3 \div 1 - \frac{1}{2} \div \frac{1}{2}$$

- B. $\frac{5}{14}$
 C. $\frac{14}{25}$
 D. $\frac{33}{40}$

32. How many cubes have been used to make the stack below?



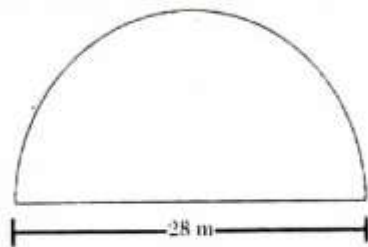
- A. 60
 B. 40
 C. 100
 D. 20
33. An inter-school soccer competition started at 3:15pm. After 45 minutes players went for a 15 minutes break. The game took another 55 minutes to end. At what time in the 24hr clock system did the game end?
 A. 1630h
 B. 1655h
 C. 0510h
 D. 1710h
34. The table below shows the number of people who attended an agricultural show one Saturday.

Male adults	Female adults	Children
986	3145	5807

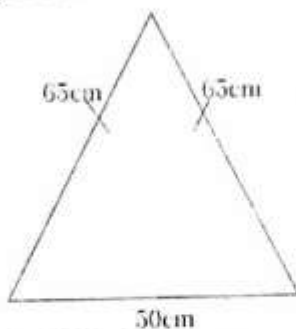
- How many more children than adults attended the show?
 A. 4821
 B. 4131
 C. 2662
 D. 1676

35. Solve the value of x in:
 $3(x + 4) - 10 = 32$
 A. 10
 B. $12\frac{2}{3}$
 C. $12\frac{2}{3}$
 D. $16\frac{2}{3}$

36. A plot of land is in the shape of a semi-circle of diameter of the plot in metres.



- A. 72m
B. 44m
C. 88m
D. 112m
37. What is the value of:
 $\frac{4a^2 + k^2}{2a}$ if $a = 2, k = 5 - a$
- A. 3.25
B. 6.25
C. 16.25
D. 4.75
38. Below are properties of a certain quadrilateral.
- (i) Diagonals are equal
 - (ii) Two pairs of parallel sides
 - (iii) All sides are equal
 - (iv) Diagonals bisect at 90°
- Which quadrilateral has been described above?
- A. Rhombus
B. Square
C. Rectangle
D. Parallelogram
39. The diagram below shows a vegetable garden in the shape of an isosceles triangle. Calculate the area of the garden.



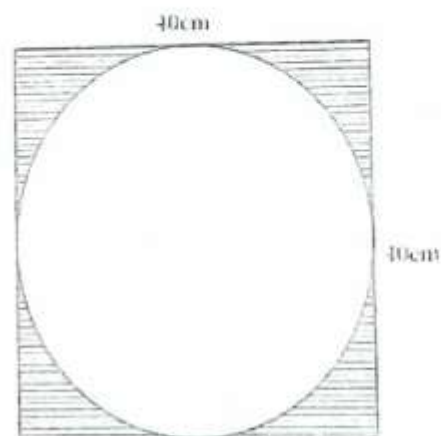
- A. 325m^2
B. 1500m^2
C. 750m^2
D. 180m^2

40. Which of the following is the correct order to write the fractions $\frac{3}{4}, \frac{5}{6}, \frac{2}{5}, \frac{7}{10}$ from the largest to the smallest?

- A. $\frac{5}{6}, \frac{3}{4}, \frac{7}{10}, \frac{2}{5}$
B. $\frac{5}{6}, \frac{7}{10}, \frac{3}{4}, \frac{2}{5}$
C. $\frac{7}{10}, \frac{5}{6}, \frac{2}{5}, \frac{3}{4}$
D. $\frac{2}{5}, \frac{7}{10}, \frac{3}{4}, \frac{5}{6}$

41. Express the ratio 3:5 as a percentage.
- A. 37.5%
B. 60%
C. 62.5%
D. $166\frac{2}{3}\%$

42. The figure below shows a square of side 40cm. A circle is drawn touching all its sides. Calculate the area of the shaded parts. ($\pi=3.14$)



- A. 344cm^2
B. 1600cm^2
C. 1256cm^2
D. 160cm^2

43. The temperature of a place at 12:00 noon was 36.5°C . Find its new temperature after a drop of 6.9°C .
- A. 30.6°C
B. 43.4°C
C. 29.6°C
D. 42.4°C

44. Lasai bought the following items from a shop.

2kg sugar @ sh.70

1kg cooking fat @ sh.52

3kg salt @ sh.40

2kg packet of maize flour @ sh.56

If she gave the shopkeeper a sh.1000 note, how much balance did she get?

- A. Sh.218
B. Sh.424
C. Sh.782
D. Sh.576

45. Nyambura and Winnie shared fish in the ratio 8:5 respectively. If Winnie got 12kg less than Nyambura, how many kgs did the fish weigh?

- A. 32
B. 20
C. 44
D. 52

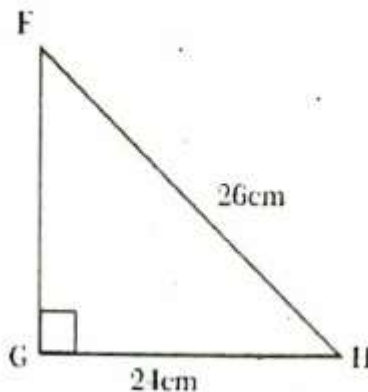
46. Convert $12\frac{1}{2}\%$ as a fraction in the simplest form.

- A. $\frac{25}{200}$
B. $\frac{5}{40}$
C. $\frac{25}{2}$
D. $\frac{1}{8}$

47. Multiply 12.25×2.34 correct to 2 decimal places.

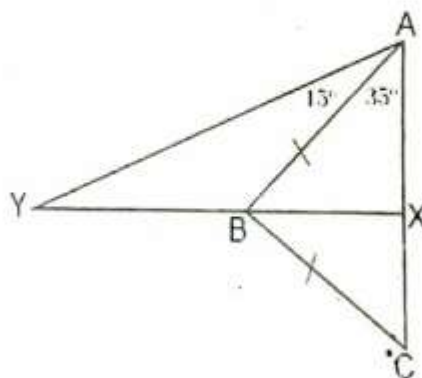
- A. 28.6182
B. 28.66
C. 28.67
D. 29.00

48. In the triangle FGH below, $GH = 24\text{cm}$, $FH = 26\text{cm}$ and $\angle FGH = 90^\circ$. Find the area of the triangles.



- A. 100cm^2
B. 10cm^2
C. 240cm^2
D. 120cm^2

49. What is the size of angle AYB in the diagram below YX bisects angle ABC.



- A. 35°
B. 40°
C. 55°
D. 90°

50. Find the square root of $\sqrt{0.0625}$

- A. 0.25
B. 0.5
C. 0.025
D. 0.05

ACHIEVERS FOCUS EXAMINATION SERIES

Kenya Certificate of Primary Education (K.C.P.E)

STANDARD 8 – CODE 001 – 2020

SCIENCE

Time: 1 hour 40 minutes

READ THESE INSTRUCTIONS CAREFULLY

1. You have been given this question booklet and separate answer sheet. The question booklet contains 50 questions.
2. Do any necessary rough work on this booklet.
3. When you have chosen your answer, mark it on the **answer sheet**, not in this question booklet.

HOW TO USE THE ANSWER SHEET

4. Use only an ordinary pencil
5. Make sure you have written on the answer sheet:
Your index Number
Your Name
Name of Your School
6. By drawing a **dark line** inside the correct numbered boxes mark your full Index Number (i.e. School Code Number and the three-figure Candidate's Number) in the grid near the top of the answer sheet.
7. Do not make any marks outside the boxes
8. Keep the sheet as clean as possible and not fold it.
9. For each of the questions 1 – 50 four answers are given. The answers are lettered A, B, C and D. In each case only **one** of the four answers is correct. Choose the correct answer.
10. On the answer sheet the correct answer is to be shown by drawing a **dark line** inside the box in which the letter you have chosen is written.

Example

In the Question Booklet:

4. Which one of the following components of blood is involved in clotting of blood after injury?

- A. Plasma
- B. White blood cells
- C. Red blood cells
- D. Platelets

The correct answer is D

On the Answer Sheet:

4 [A] [B] [C] [~~D~~] **14** [A] [B] [C] [D] **24** [A] [B] [C] [D] **34** [A] [B] [C] [D] **44** [A] [B] [C] [D]

In the set of boxes numbered 4, the box with letter D printed in it is marked.

11. Your **dark line** **must** be within the box.
12. For each question **only one** box is to be marked in each set of four boxes.

Website: www.achieversfocus.co.ke

Email: wegopublish@gmail.com

1. Which one of the following clouds are found high in the sky and have a flat base?
 - A. Nimbus
 - B. Cumulus
 - C. Stratus
 - D. Cirrus
2. Draining stagnant water can help prevent the spread of:
 - A. typhoid and malaria
 - B. cholera and bilharzia
 - C. typhoid and cholera
 - D. bilharzia
3. Convection is a mode of heat transfer in:
 - A. liquids only
 - B. gases only
 - C. liquids and solids
 - D. liquids and gases
4. Which of the following is a social effect of drug abuse?
 - A. Drug induced accidents
 - B. Withdrawal
 - C. Addiction
 - D. Memory loss
5. The component of blood that helps in clotting is:
 - A. plasma
 - B. platelets
 - C. red blood cells
 - D. white blood cells
6. The type of animal feed grown, cut and fed to animals is known as
 - A. pasture
 - B. concentrates
 - C. fodder
 - D. pasture
7. Which of the following is not a source of current electricity?
 - A. Windmills
 - B. Car battery
 - C. Geothermal wells
 - D. Water dams
8. The processes involved in changing ice to vapour are:
 - A. melting and condensation
 - B. evaporation and condensation
 - C. freezing and evaporation
 - D. melting and evaporation
9. Rays of Light appear bend when they move from the transparent medium to another due to
 - A. bouncing
 - B. dispersion
 - C. refraction
 - D. splitting
10. The component of air used in photosynthesis is also used in:
 - A. germination
 - B. fire extinguisher
 - C. light bulbs
 - D. making proteins
11. Which of the following is a biotic component of the environment?
 - A. Air
 - B. Plants
 - C. Soil
 - D. Water
12. Children who suffer from Kwashiorkor and anaemia lack of _____ and _____ respectively.
 - A. iron and proteins
 - B. calcium and iron
 - C. proteins and iron
 - D. enough food and iron

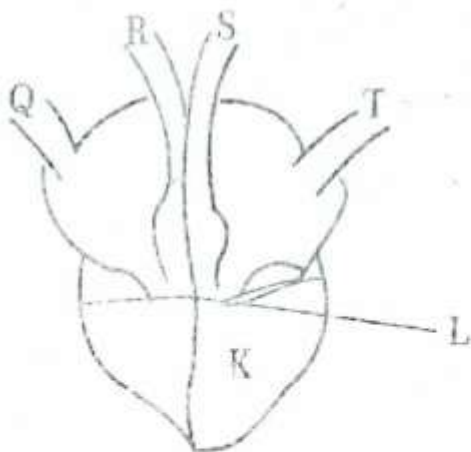
13. The pistil of a flower consist of
- petals, stigma, style and ovary
 - style, stigma, ovary and ovules
 - filament, pollen grains and anthers
 - sepals, petals, style and ovary

14. Plants depend of each other following except?
- Food
 - Support
 - Shade
 - Habitat

15. Which of the following crop pests cuts the stems of young plants?
- Cutworms
 - Stalk borer
 - Aphids
 - Termites

16. Which of the following methods of controlling animal parasites can be used for both ticks and liver flukes?
- Deworming
 - Spraying
 - Rotational grazing
 - Dipping

Use the diagram to answer questions 17 to 19.



17. The two vessels that carry bright red blood are labeled?
- Q, R
 - Q, T
 - S, T
 - R, S

18. The features marked L are useful because they
- allow backflow of blood
 - help in blood clotting
 - help in pumping of blood
 - prevent blood from flowing backwards

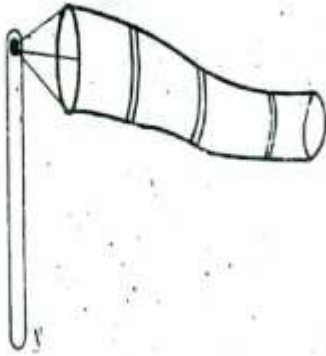
19. The chamber marked K has thick muscle wall mainly because:
- it receives a lot of blood
 - it pumps blood to all parts of the body
 - it receives deoxygenated blood
 - it pumps oxygenated blood

20. Which of the following drugs is prohibited in Kenya?
- Bhang
 - Alcohol
 - Miraa
 - Tobacco

21. Which method of preserving food will keep fish fresh for a long time?
- Salting
 - Freezing
 - Drying
 - Smoking

22. The soil that cracks when dry also:
- has large air spaces
 - is sticky when wet
 - is good for farming
 - has a good drainage

23. Which of the following is true about the instrument below?

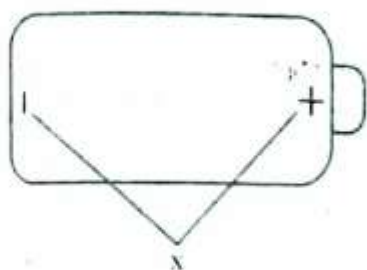


- A. It is used to tell the speed of wind
 - B. It points where the wind is blowing
 - C. It has two open ends
 - D. It should be kept under shade
24. Which of the following shows using water sparingly?
- A. Harvesting rain water
 - B. Using sprinkler irrigation
 - C. Repairing leaking pipes and tanks
 - D. Using water that has been used to wash clothes to mop the floor
25. Which of the following is a myth about HIV/AIDS?
- A. AIDS has a cure.
 - B. HIV/AIDS is spread through sexual intercourse
 - C. HIV/AIDS patients are always thin
 - D. HIV/AIDS can affect anyone
26. All the following are major nutrients required by plants except?
- A. Manganese
 - B. Phosphorus
 - C. Nitrogen
 - D. Potassium
27. The most abundant component of blood is:
- A. platelets
 - B. plasma
 - C. red blood cells
 - D. white blood cells

28. Which of the following groups of crops are fibre crops?

- A. Beans, Peas, Maize
 - B. Cotton, sisal, flax
 - C. Potatoes, Cassava, Carrots
 - D. Maize, wheat, rice
29. Which one of the following is not found in tobacco smoke?
- A. Caffeine
 - B. Nicotine
 - C. Tar
 - D. Carbon monoxide
30. Which of the following cannot be measured using a spring balance?
- A. Weight
 - B. Friction
 - C. Magnetism
 - D. Mass
31. The following small animals belong to the same group except?
- A. Flea
 - B. Mite
 - C. Spider
 - D. Tick
32. All the following are characteristics of an insect pollinated flower except?
- A. Have scent
 - B. Produce nectar
 - C. Feathery stigma
 - D. Brightly coloured petals

33. The two parts of a dry cell labelled x are called?



- A. Poles
B. Terminals
C. Circuits
D. Ends
34. The following are physical changes in both boys and girls during adolescent except?
- A. Production of sex cells
B. Broadening of hips
C. Pimples may appear
D. Growth of public hair
35. In female human beings ovulation happens in the?
- A. oviduct
B. ovary
C. uterus
D. cervix
36. The main vein is the
- A. pulmonary vein
B. aorta
C. vena cava
D. pulmonary artery
37. Which one of the following has definite volume and mass only?
- A. Wood
B. Water
C. Air
D. Vapour

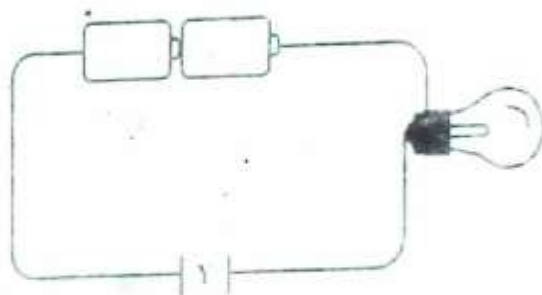
38. Which of the following materials is opaque?

- A. Kerosene
B. Windscreen
C. Mirror
D. Frosted glass

39. The type of soil erosion that occurs on animal paths is:

- A. rill erosion
B. sheet erosion
C. splash erosion
D. gully erosion

40. The diagram below represents a simple circuit. Which of the following materials cannot make the bulb to light when placed at point Y?



- A. Copper
B. Razor blade
C. Graphite
D. Glass
41. Which of the following stores food in the stem?
- A. Cassava
B. Irish potato
C. Carrot
D. Arrow root
42. The gas that is used by legumes to make proteins is approximately.
- A. 78%
B. 0.03%
C. 21%
D. 0.97%

43. Which of the following is not a water pollutant?

- A. Raw sewage
- B. Acid rain
- C. Oil spills
- D. Tobacco smoking

44. Which of the following is not a special sound?

- A. Car hooting
- B. Fire siren
- C. Baby crying
- D. Bell ringing

45. All the following are characteristics of amphibians except?

- A. Have external fertilization
- B. Have a backbone
- C. Have scales on their bodies
- D. Lay eggs

46. Which of the following is correctly matched with their products?

- A. Sheep - mutton and mohair
- B. Cow - beef and mohair
- C. Goat - mutton and mohair
- D. Poultry - egg and wool

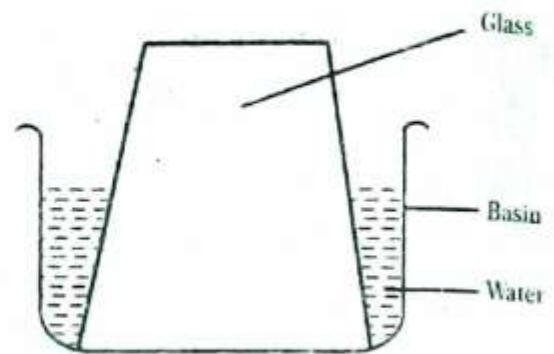
47. Which of the following can be attracted by a magnet?

- A. Plasmodium
- B. Aluminum rod
- C. Iron nails
- D. Cobalt filings

48. Malaria is a communicable disease caused by:

- A. plasmodium
- B. female anopheles
- C. stagnant water
- D. mosquito

49. The water did not enter the glass because:



- A. air exerts pressure
- B. water is heavier
- C. air occupies space
- D. air expands on heating

50. The best method of controlling weeds is:

- A. digging them out
- B. spraying with herbicides
- C. uprooting them
- D. burning them

ACHIEVERS FOCUS EXAMINATION SERIES

Kenya Certificate of Primary Education (K.C.P.E)

STANDARD 8 – CODE 001 – 2020

SOCIAL STUDIES AND RELIGIOUS EDUCATION

Time: 2 hour 15 minutes

READ THESE INSTRUCTIONS CAREFULLY

1. You have been given this question booklet and separate answer sheet. The question booklet contains 90 questions.
2. Do any necessary rough work on this booklet.
3. When you have chosen your answer, mark it on the **answer sheet**, not in this question booklet.

HOW TO USE THE ANSWER SHEET

4. Use only an ordinary pencil
5. Make sure you have written on the answer sheet:
Your Index Number
Your Name
Name of Your School
6. By drawing a **dark line** inside the correct numbered boxes mark your full Index Number (i.e. School Code Number and the three-figure Candidate's Number) in the grid near the top of the answer sheet.
7. Do not make any marks outside the boxes
8. Keep the sheet as clean as possible and not fold it.
9. For each of the questions 1 – 90 four answers are given. The answers are lettered A, B, C and D, in each case only **one** of the four answers is correct. Choose the correct answer.
10. On the answer sheet the correct answer is to be shown by drawing a **dark line** inside the box in which the letter you have chosen is written.

Example

In the Question Booklet:

31. Which one of the following groups of people belong to a nuclear family?

- A. Mother, Son, Grandfather
- B. Father, Son, Uncle
- C. Father, Daughter, Son
- D. Grandmother, Father, Daughter

The correct answer is C

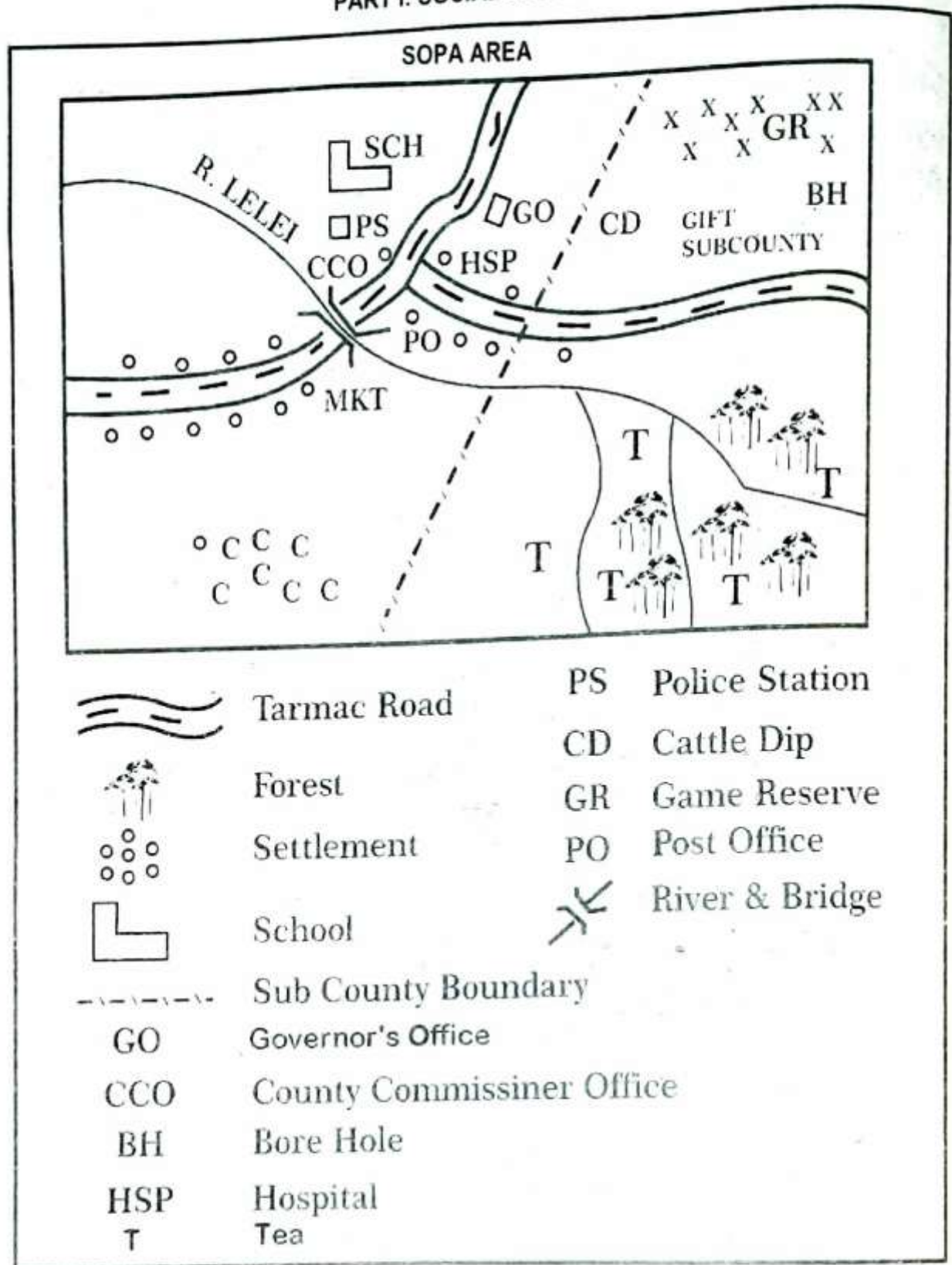
On the Answer Sheet:

31 [A] [B] [C] [D] 11 [A] [B] [C] [D] 21 [A] [B] [C] [D] 31 [A] [B] [C] [D] 41 [A] [B] [C] [D]

In the set of boxes numbered 31, the box with letter D printed in it is marked.

11. Your **dark line must** be within the box.
12. For each question **only one** box is to be marked in each set of four boxes.

Website: www.achieversfocus.co.ke
Email: wegopublish@gmail.com



Study the map of SOPA area provided and answers questions 1 to 7.

1. Sopa area slopes towards
- South East
 - North West
 - East
 - South

2. The main activity carried out in Sopa area is?
- Transport
 - Fishing
 - Mining
 - Farming

3. The settlement pattern in the area is influenced by:
 - A. Transport
 - B. Drainage
 - C. Economic activities
 - D. Religious activities
4. The climate to the North East of Sopa Area is:
 - A. Cool and wet
 - B. Hot and dry
 - C. Hot and wet
 - D. Cool and dry
5. What is the direction of the Bore hole from the market?
 - A. South East
 - B. South west
 - C. North West
 - D. North East
6. Sopa area is administered by:
 - A. County commissioner
 - B. District commissioner
 - C. Governor
 - D. Members of County Assembly
7. Traders who wish to start a business in Sopa area should obtain trading license from:
 - A. Chief Office
 - B. County office
 - C. County commissioner's office
 - D. Police station

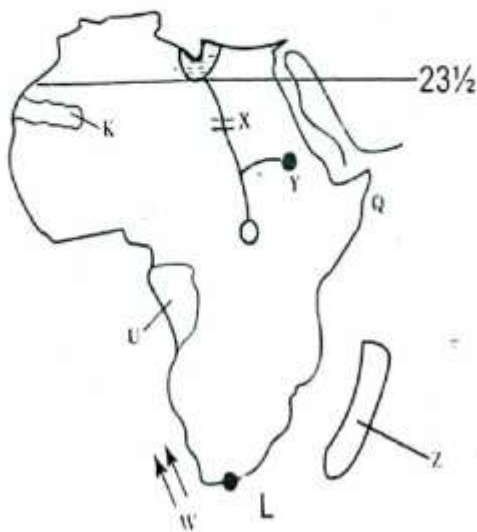
Use the diagram below to answer the questions that follow.



8. The part marked Z is
 - A. heath and moorland
 - B. rainforest
 - C. Savannah
 - D. snow and bare rock

9. The diagram above represents
 - A. rainforest
 - B. alpine forest
 - C. lowland forest
 - D. artificial forest
10. The main factor influencing the above vegetation is
 - A. mountain
 - B. rain
 - C. altitude
 - D. nearness to relief
11. The main economic activity in the section marked B is
 - A. pastoralism
 - B. lumbering
 - C. tourism
 - D. furniture making
12. The main reason that led to the migration of the river lake nilotes from South Sudan was
 - A. search for fishing ground
 - B. search for pasture and water
 - C. search for land for cultivation
 - D. overpopulation
13. The officers who carry out census are called
 - A. enumerators
 - B. encounters
 - C. returning officers
 - D. emeritus
14. The most economical method of poultry rearing is
 - A. battery system
 - B. free range system
 - C. deep litter system
 - D. fold system

Use the diagram below to answer the questions that follow.



15. The Ocean currents marked W are known as:
- Guinea current
 - Agulhas current
 - Walvis Bay current
 - Canny current
16. The main effect of the current marked W on the nearby land is:
- brings convectional rain
 - brings high humidity
 - causes fog and mist
 - increases agriculture
17. Vegetation on the Eastern side of the Island marked Z is?
- Equatorial
 - Savannah
 - Humid subtropical
 - High veld
18. The main factor influencing climate in the area marked Q is
- relief
 - latitude
 - nearness to a large water body
 - shape of coastline
19. The feature marked Y was formed as a result of
- downwrapping
 - erosion
 - lava damming
 - human activities
20. The most southerly point of Africa marked L is:
- Cape Agullas
 - Cape Verde
 - Cape Ras Hafun
 - Cape Lopez
21. The main reason for establishment of the project marked X is:
- industrialization
 - put more land under cultivation
 - improve water transport
 - production of HEP
22. The policy of administration used in the country marked K was
- indirect rule
 - paternalism
 - assimilation
 - association
23. The physical feature marked U on the area covered by the map is
- Fouta Djallon
 - Adamawa Highland
 - Ahaggar
 - Tibesti
24. Which of the following countries is not crossed by the latitude marked $23\frac{1}{2}^{\circ}$ N?
- Western Sahara
 - Mali
 - Algeria
 - Sudan
25. Which of the following factors does not influence population distribution in Kenya?
- Climate
 - Soil
 - Drainage
 - Latitude
26. The type of soil suitable for fish farming is:
- Black cotton
 - Red volcanic
 - Sand
 - Alluvial

Use the diagram below to answer the questions that follow.



27. The above diagram represents
- orographic rainfall
 - convective rainfall
 - frontal rainfall
 - cyclonic rainfall
28. Which of the following areas experience the above conditions?
- Nyeri
 - Lamu
 - Kisumu
 - Malindi
29. The nature of the winds marked X is
- warm and moist
 - cool and moist
 - cool and wet
 - cold and dry
30. The main economic activity in the side marked Y is:
- apiculture
 - mixed farming
 - tourism
 - beef farming
31. A group of people born and initiated around the same time forms
- an age group
 - a clan
 - a family
 - an age set
32. Which of the following is not a dairy breed of animal?
- Friesian
 - Jersey
 - Guernsey
 - Red Poll
33. The largest pastoral community in Africa are:
- Maasai
 - Fulani
 - Tswana
 - Khoikhoi
34. Maize in Kenya was introduced by the
- British
 - Arabs
 - Missionaries
 - Portuguese
35. (i) Used in glass making
(ii) Used in fixing dyes
(iii) Used for softening water
(iv) Used in oil refineries
The mineral described above is?
- Soda Ash
 - Diatomite
 - Fluorspar
 - Limestone
36. Which of the following is a tertiary industry?
- Furniture making
 - Fruit canning
 - Vehicle assembly
 - Banking
37. Which road connects East Africa to West Africa?
- Great North road
 - Trans-Saharan highway
 - Trans-Saharan Highway
 - Cotonou Gao Oudja
38. Which one of the following is not a copper mining area in Zambia?
- Mfulira
 - Bwana mkubwa
 - Chilufya
 - Lubumbash
39. Which one of the following is a print media?
- Electronic mail
 - Fax
 - Billboard
 - Short message service

40. Who among the following leaders resisted the French occupation of his/her area?
 A. Samoure Toure
 B. Koitalel Arap Samoei
 C. Mekatilili wa Menza
 D. Kabaka Mwanga
41. The arm of the government that interprets the law is
 A. Legislative
 B. Executive
 C. Judiciary
 D. Cabinet
42. Who among the following is in charge of elections in a polling station?
 A. Returning officer
 B. Presiding officer
 C. Polling station clerk
 D. Chairperson of IEBC
43. Which one of the following is not an effect of rotation of the earth?
 A. Causes deflection of wind and ocean currents
 B. Cause day and night
 C. Causes differences in time along different longitudes
 D. Causes different seasons
44. When is it summer solstice?
 A. June 21st
 B. March 21st
 C. September 23rd
 D. December 22nd
45. The largest lake in the desert in Africa is
 A. Lake Chad
 B. Lake Turkana
 C. Lake Siwa
 D. Lake Birket
46. The main economic activity in the smallest relief region in Kenya is?
 A. Farming
 B. Fishing
 C. Tourism
 D. Pastoralism
47. The sixth Chapter of the new constitution is?
 A. Land and environment
 B. Leadership and integrity
 C. Bill of rights
 D. The republic
48. The statements issued by the speaker to declare seats both elective and nominative are called:
 A. proroque
 B. summons
 C. mace
 D. writs
49. The head of the legal system in Kenya is
 A. President
 B. Chief justice
 C. Attorney general
 D. Speaker
50. The atmospheric pressure is measured in units known as:
 A. barometer
 B. campbell recorder
 C. knots
 D. millibars
51. Lines on a map joining places with the same temperature are known as
 A. isotherms
 B. isohyets
 C. isoneps
 D. isohels
52. The first African to join the Legco was:
 A. B.A Ohanga
 B. Eliud Mathu
 C. Jomo Kenyatta
 D. Daniel Moi
53. The traditional parliament of Swaziland is called
 A. liqoqo
 B. lukiko
 C. senate
 D. libandala

54. The first chairperson of Africa Union was
 A. Haile Selassie
 B. Thabo Mbeki
 C. Kwame Nkrumah
 D. Gamal Abdel Nasser
55. Which one of the following is not a block mountain?
 A. Mt. Ruwenzori
 B. Mt. Pare
 C. Mt. Meru
 D. Mt. Usamabara
56. The main problem facing trading blocks in Africa is
 A. lack of variety of goods
 B. poor transport and communication
 C. lack of common currency
 D. quota system
57. Specialized skills in informal education were taught through
 A. observation and imitation
 B. apprenticeship
 C. proverbs and riddles
 D. formal assessment
58. Which of the following countries were recognized by USA as a home of slaves?
 A. Liberia
 B. Ethiopia
 C. Egypt
 D. South Africa
59. The main problem facing communication systems in Africa is?
 A. Vandalism
 B. Illiteracy
 C. Network problem
 D. Different languages
60. Who among the following represents the country in the National Assembly?
 A. Governor
 B. Member of parliament
 C. Member of state assembly
 D. Member of county assembly

PART II: RELIGIOUS EDUCATION CHRISTIAN RELIGIOUS EDUCATION

61. According to the genesis stories of creation
 A. birds and sea creatures were created after man
 B. heavenly bodies were created on the fifth day
 C. man was created on the fifth day
 D. plants were created on the third day
62. Which statement corresponds to the promise given by God to Abraham?
 A. He will have a son
 B. He will build a temple in Jerusalem
 C. His descendants will not die
 D. He will be a king
63. The story of Joseph in Potiphar's house teaches Christians to
 A. fight for their rights
 B. be kind
 C. forgive their enemies
 D. overcome temptations
64. During the call of Moses, God's presence was manifested by
 A. a cloud
 B. a burning bush
 C. a flaming torch
 D. a sword of fire
65. The freeing of the Israelites from Egypt is recorded in the book of
 A. Numbers
 B. Exodus
 C. Genesis
 D. Leviticus
66. Which one of the Ten Commandments was given to Moses on Mount Sinai?
 A. Forgive those who trespass against us
 B. Do not desire your neighbour's property
 C. Forgive those who forgive you
 D. Judge others wisely

67. The temple of Jerusalem was built by:
 A. David
 B. Saul
 C. Solomon
 D. Jeroboam
68. _____ healed Naaman of leprosy
 A. Elijah
 B. Gehazi
 C. Moses
 D. Elisha
69. In Luke 2:10, the Angel said "Do not be afraid, I am here with good news for you". The good news was the:
 A. death of Jesus
 B. dedication of Jesus
 C. resurrection of Jesus
 D. birth of Jesus
70. At the age of the twelve years, Jesus was taken to the temple for:
 A. dedication and purification
 B. the Passover feast
 C. baptism
 D. circumcision
71. Which one of the following does not explain what external life means?
 A. It begins after birth
 B. It begins on earth and continues in heaven
 C. It starts when one believes in Jesus
 D. It is life without an end
72. According to Jesus, the Kingdom of God belongs to those who are like children because they:
 A. are pure and innocent
 B. are poor and weak
 C. are lame and innocent
 D. pray to God always
73. Christian fasting period is known as
 A. Advent
 B. Lent
 C. Christmas
 D. Easter
74. _____ replaced Judas after his death.
 A. Paul
 B. Mathew
 C. Mathias
 D. Peter
75. By fixing Malchus' ear which was cut by Peter, Jesus demonstrated that he was:
 A. a peaceful Messiah
 B. able to forgive sins
 C. in charge of nature
 D. a universal savior
76. Who among the following died because of cheating the Holy Spirit?
 A. Judas
 B. Peter
 C. Saphira
 D. Stephen
77. Who among the following was not among the seven deacons?
 A. Philip
 B. Nicolas
 C. Prochorus
 D. Saul
78. The only historic book New Testaments is:
 A. Genesis
 B. Nicholas
 C. Malachi
 D. Acts of Apostles
79. The best way in which children demonstrate love and respect is by:
 A. doing whatever they want
 B. asking for anything from their parents
 C. kneeling down when greeting their parent
 D. following their advice to the letter
80. Stephen the deacon was accused of:
 A. preaching against the Roman government
 B. blasphemy
 C. converting many Jews into Christianity
 D. healing on a Sabbath
81. Sex before marriage is known as:
 A. adultery
 B. incest
 C. fornication
 D. masturbation

82. Which one of the following practices was common among African traditional communities?
- Worshipping on Sabbath
 - Offering animal sacrifices to God
 - Circumcision of girls before marriage
 - Pouring libations to appease the ancestors
83. According to both African creation stories and in Genesis:
- God created man and other things after
 - we must respect and care for God's creation.
 - people came from heaven
 - men helped God during creation
84. Which one of the following is a community based community thing?
- Being a senator
 - Joining a local health centre
 - Participating in an effort raise money for local health centre
 - Buying a big car
85. One of the following has a characteristics of a public property except one. It is
- property that can be owned by an individual
 - property that is only for selected few
 - property that is owned by tycoons
 - Property that is communally owned
86. Paul and Silas worshipped God by:
- praying and singing hymns
 - hands on the fellow prisoners
 - preaching to the Prison officer
 - praying and fasting
87. The early Christian missionaries built the first mission station at:
- Rabai
 - Malindi
 - Lamu
 - Mombasa
88. Jane does not take her report book home for the parents to sign. Which Christian value does she lack?
- Hard work
 - Obedience
 - Patience
 - Honesty
89. Joel's grandfather has been in hospital for six months now. As a christian, Joel should:
- cease praying for his grandfather
 - take him away from hospital to reduce the hospital bill
 - persist in praying for his grandfather
 - pour libation to appease the ancestral spirits
90. The early Christian missionaries came to Kenya to:
- introduce Western culture
 - spread the good news
 - promote African culture
 - stop slave trade

ISLAM RELIGIOUS EDUCATION

61. In which Surah does Allah (SWT) teach us that severe punishment will be given to those who deny the righteous to practice their faith?
- Surah al Alaq
 - Surah al-Qadar
 - Surah Al-Tin
 - Surah al -Fatiha
62. How many Rakaats does a Muslim pray in Salatut Tahajjud during the night of power?
- 4 Rakaats
 - 6 Rakaats
 - 2 Rakaats
 - 8 Rakaats
63. The hadith, 'keep away from two cursed actions the passing of urine or stool along the pathways or where people sit'. Teaches us about:
- Ilham
 - Twahara
 - Ibada
 - Saum
64. The prophet (saw) said, "Muslims are like a single building, each side holds the other". The Hadith teaches us the importance of:
- social gathering
 - unity among the Muslims
 - congregational prayer
 - building strong houses
65. During Hajj Muslims run or jog between Mt. Safa and Marwa. This act is referred to as:
- Miqat
 - Arafat
 - Sa'l
 - Taqseer
66. In Hajj **NUSUK** refers to:
- the act of running between Safa and Marwa
 - the rites of Hajj
 - the act of going round the Kaaba seven times
 - the act of stoning at the Jamarrat
67. From which Surah of the Holy Quran do we get this verse? "Wama adraka maa Laylatul Qadar"
- Suratul Zilzala
 - Suratul Maun
 - Suratul Tiyn
 - Suratul Qadar
68. Why it's **NOT** recommended for a Muslim to fast on Saturday alone?
- It is an Eid day for Muslims
 - Muslims should relax and eat nice meals on this day
 - It's a day honored mostly by the Jews
 - It's a day when Muslims are supposed to fight Jihad
69. Which of the following types of tawaaf is compulsory?
- Tawaful Ifadha
 - Tawaful Qudum
 - Tawaful Widaa
 - Tawaful Tamattu
70. Man should be thankful to Allah (SWT) as he was created in the best form and in good proportion. This teaching is obtained from Suratul:
- Al-Alaq
 - Al-Qadar
 - Al-Tiyn
 - Al-Nasr
71. A neighbor who been pouring dirty water in front of your house has been admitted to hospital. Which one of the following acts will be the **BEST** thing to do?
- Visit him at the hospital and pray for him
 - Pray for him to die as he is a bad person
 - Arrange for his house to be robbed by thieves
 - Be happy as he will not pour dirty water again

72. Bismi-lah, Allah Akbar, Allah-Huma-mahaadha mnika wa ilayka". These words are said when:
 A. one converts to Islam
 B. one is in a big problem
 C. one is near to die
 D. one wants to slaughter especially for a pilgrim in Hajj
73. The belief in Allah (SWT) can also be said as:
 A. Maashaalah
 B. Amantu -Billah
 C. Inna-Lilah
 D. Astaqfirullah
74. The belief in the day of Maashara is one of the articles of:
 A. Islam
 B. Sunnah
 C. Iman
 D. Ihsan
75. Allah does not punish immediately when we sin. This is because he is patient. This attribute is called:
 A. As-Sabur
 B. Al-Hasseeh
 C. Al-Baqii
 D. Al-Hakim
76. The following statements are correct **EXCEPT** one. Which one?
 A. Al-Khidhir means green
 B. The treaty of Huddaybiyah was to last for 10 years
 C. Ayyarnul-Beidh are the 13th, 14th and 15th of every Muslim month
 D. Sillatu-Shawaal is the six days of the month of Shawaal
77. Which one of the following locations of Hajj reminds us of the Day of Judgement?
 A. Miqai
 B. Arafat
 C. Muzdalifa
 D. Mina
78. An important occasion in the month of Shawwal is called?
 A. Ashura
 B. Miraj
 C. Eidul Adha
 D. Eidul-Fitri
79. The festival which is wrongly matched with the date of occurrence is:
 A. Hijrah -10th Muharam
 B. Miraj -27th Rajab
 C. Miladun Nabii -12th Rabbil-Awal
 D. Eidul-Adha -10th DhUL-Hijah
80. In Islam its makruh to eat _____ before attending jum'ah prayers
 A. fish
 B. oranges
 C. onions
 D. cabbages
81. Which one of the following statements is **NOT** an effect of drug abuse?
 A. They make one bright in class
 B. Can cause death
 C. May damage body parts
 D. May lead to HIV and AIDS infection
82. The following terms are against Islamic practices **EXCEPT** one. Which one is it?
 A. Ghush
 B. Black marketing
 C. Bargaining
 D. Usury
83. When Bani-Bakr and the Quraysh attacked Banu-Khuzaaah, the prophet (SAW) gave them **THREE** conditions. Which one is **NOT**?
 A. Compensate by paying blood money
 B. End their treaty with Bani- Bakr
 C. Review their treaty with the Muslims
 D. Cancel their treaty with the Muslims

84. Why did the prophet (SWT) instruct his army to avoid bloodshed during the conquest of Makkah?
- A. He wanted a peaceful conquest
 - B. He was not prepared to fight
 - C. The Muslims were fewer than the Makkans
 - D. The Muslim army was weaker than the Quresh Army
85. Sijdatul Tilawa is performed when a person:
- A. is reading the Holy Quran
 - B. wants to thank Allah (SW) for success
 - C. is unable to stand during prayers
 - D. omits a pillar of salah
86. Allah (SWT) gave His angels duties to perform. The angel who is yet to perform his duty is?
- A. Mikael
 - B. Jibril
 - C. Israfil
 - D. Izrail
87. Which of the following virtues denied Nabii Musa from learning more from Al-Kidhr?
- A. Patience
 - B. Obedience
 - C. Truth
 - D. Righteousness
88. "Am prophet of Allah (SWT), I spoke to Allah behind a veil of fire. Who am I?"
- A. Nuh (AS)
 - B. Musa (AS)
 - C. Issa (AS)
 - D. Muhammad (S.A.W)
89. Three of the following are positive use of the tongue. Which one is **NOT**?
- A. Educating others
 - B. advocating for injustice
 - C. Reading the Holy Quran
 - D. Speaking the truth
90. Muslims from Kenya will put on Ihram at a place called?
- A. Yalamlam
 - B. Dhul- Hulaifa
 - C. Dhat Iraq
 - D. Juhfa